

Tutorials: NDMI025 - Randomized Algorithms

Karel Král

May 27, 2021

This text is a work in progress, do not distribute. All errors in this text are on purpose. Please report them to my email kralka@iuuk.mff.cuni...

Contents

1 Exercises	5
1.1 Tutorial 1.	5
1.2 Tutorial 2.	7
1.3 Tutorial 3.	7
1.4 Tutorial 4.	8
1.5 Tutorial 5.	8
1.6 Tutorial 6.	10
1.7 Tutorial 7.	11
1.8 Tutorial 8.	12
1.9 Tutorial 9.	13
1.10 Tutorial 10.	14
1.11 Tutorial 11.	16
2 Theory	19
2.1 Probability 101	19
2.2 Markov Chain	19
3 Solutions	21
3.1 Tutorial 1.	21
3.2 Tutorial 2.	30
3.3 Tutorial 3.	36
3.4 Tutorial 4.	41
3.5 Tutorial 5.	44
3.6 Tutorial 6.	51
3.7 Tutorial 7.	59
3.8 Tutorial 8.	65
3.9 Tutorial 9.	69
3.10 Tutorial 10.	72
3.11 Tutorial 11.	77

Chapter 1

Exercises

1.1 Tutorial

1.
 - Can you all hear me?
 - If you are uncomfortable asking a question in English, just ask in Czech/Slovak and I will translate.
 - Have you all taken:
 - (a) a probability course (discrete probability, random variables, expected value, variance, Markov, Chernoff)
 - (b) a linear algebra course (matrix operations, linear maps, eigenvectors and eigenvalues, discriminant)
 - (c) a graph theory course (what a combinatorial graph is, bipartite, complete, coloring)
 - (d) a combinatorics course (factorial, binomial coefficients)
 - (e) an algorithms / programming course (big-O notation, possibly understanding Python based on the other question)
 - This class is heavy on theory. Are you interested in computer simulations and or implementations? If so:
 - (a) Python
 - (b) R
 - (c) C++

Solution: 1

2. You are presented with two sealed envelopes. There are k € in one of those and ℓ € in the other ($k, \ell \in \mathbb{N}$ but you do not know k, ℓ in advance). You may open an envelope and (based on what you see) decide to take this one or the other (without looking into both).
 - (a) Is there a way how to walk away with the larger amount of money with probability strictly larger than 0.5?
 - (b) What is the expected value you walk away with (in terms of k, ℓ)?
 - (c) Simulate.

Solution: 2

3. Graph isomorphism. You have seen an interactive proof of graph non-isomorphism on the class. Can you come up with an interactive proof of graph isomorphism?

Solution: [3](#)

4. We will focus on random walks and their properties a lot.
- (a) Random walks are useful when analysing algorithms – “two coloring without monochromatic triangle” of three-colorable graph.
 - (b) Random numbers in the computer are often expensive to generate, can we reduce number of used random bits (expanders)? Or even get a deterministic algorithm?
 - (c) To sample from extremely large spaces.

Let $n \in \mathbb{N}$, say $n = 30$. Let us the following problem we start with $X_0 = \lfloor n/2 \rfloor$ and do the following process:

- if $X_i \in \{0, n\}$ we stop
- we set $X_{i+1} = X_i + \delta$ where δ is picked uniformly at random from $\{-1, 1\}$

- (a) Is this a Markov chain (Definition [2.2](#))? If so can you write it’s matrix?
- (b) What is the expected number of steps until stopping?

Solution: [4](#)

5. Think of some example MCs.
- (a) Create a MC that is irreducible.
 - (b) Create a MC that is not irreducible.
 - (c) Create a MC that is periodic.
 - (d) Create a MC that is not periodic.
 - (e) Compute a stationary distribution of the following MC:

$$\begin{pmatrix} 1/2 & 1/2 \\ 1/2 & 1/2 \end{pmatrix}$$

- (f) Create a MC that has more stationary distributions.

Solution: [5](#)

6. We are collectors and we want to collect all n kinds of coupons. Coupons are sold in packages which all look the same. Thus when we buy an coupon, we buy one of n kinds uniformly at random. This is known as the *coupon collector* problem.

- (a) What is the expected number of coupons we need to buy to get all kinds?
- (b) How many coupons do we need to buy to have probability at least $1 - q$ of collecting all kinds?
- (c) What is the Markov chain? Is this similar to a random walk on some graph?
- (d) Simulate.

Solution: [6](#)

1.2 Tutorial

1. Find a family of oriented graphs of constant in-degree and constant out-degree and as large hitting time as possible.

Note that similar situation could happen on undirected graphs where the probabilities of traversing edge one way and the other way would not be the same. Which is in principle almost an oriented graph.

Solution: [1](#)

2. Let $A \in \mathbb{R}^{n \times n}$ be a matrix with eigenvalues $\lambda_1, \dots, \lambda_n$. Show that the matrix $A + dI_n$ has eigenvalues $d + \lambda_1, \dots, d + \lambda_n$.

Solution: [2](#)

3. Show Courant-Fisher: Let $A \in \mathbb{R}^{n \times n}$ be a symmetric matrix ($A^T = A$). Let $\lambda_1 \geq \lambda_2 \geq \dots \geq \lambda_n$ be its eigenvalues. Show

(a) $\lambda_1 = \max_{x \in \mathbb{R}^n, \|x\|=1} x^T A x$

(b) $\lambda_n = \min_{x \in \mathbb{R}^n, \|x\|=1} x^T A x$

(c) The eigenvalue λ_2 can be computed similarly $\lambda_2 = \max_{x \in \mathbb{R}^n, \|x\|=1, x^T u_1 = 0} x^T A x$ (where u_1 is the eigenvector corresponding to λ_1). We can get other eigenvalues in a similar manner. Moreover we could use this to prove the interlacing theorem. See https://en.wikipedia.org/wiki/Min-max_theorem

Solution: [3](#)

4. Show that a connected d -regular graph is bipartite iff the least eigenvalue of its adjacency matrix is $-d$.

Solution: [4](#)

5. Compute the eigenvalues and eigenvectors of the following graphs:

(a) K_n , the complete graph on n vertices.

(b) $K_{n,n}$, the complete bipartite graph with partites of size n each.

(c) C_n , the cycle on n vertices.

Solution: [5](#)

1.3 Tutorial

1. You are given two coins. One is fair and the other one has $\Pr[\text{tails}] = 1/4$. We use the following algorithm to distinguish those:

- Pick a coin and toss it n times.
- Let \hat{p} be the probability of getting a tails (number of tails over n).
- If $\hat{p} \geq 3/8$ we say this coin is fair.

Show that if $n \geq 32 \ln(2/\delta)$ then our algorithm answers correctly with probability at least $1 - \delta$.

Solution: [1](#)

2. You have seen that $ZPP = RP \cap \text{co-RP}$.

(a) Recall definitions of:

- RP
- ZPP
- co-RP
- BPP
- NP

- (b) Show that $RP \subseteq NP$ (and thus $co-RP \subseteq co-NP$).
- (c) Decide if $BPP = co-BPP$.
- (d) Show that if $NP \subseteq BPP$ then $NP=RP$.

Solution: [2](#)

3. How to simulate a fair coin using a tipped coin and vice versa.

- (a) We are given a fair coin $\Pr[tails] = 0.5$. Show how to generate a random bit with $\Pr[1] = p$ for a given $p \in (0, 1)$ (both $p = 0$ and $p = 1$ are a bit boring).
- (b) We are given a tipped coin – we do not even know $p = \Pr[tails]$. We are sure that $\Pr[tails] \in (0, 1)$. Generate a fair coin toss.

Solution: [3](#)

4. Show that the expected number of comparisons a quick-sort algorithm does is roughly $n \ln(n)$. Show that probability of it making at least $32n \ln(n)$ comparisons is at most $1/n^3$.

Solution: [4](#)

1.4 Tutorial

1. We have k servers that are supposed to handle $n \gg k$ jobs. But the jobs come online and there is no single computer that knows the loads of servers (otherwise we would have a lot of communication). How do we distribute the jobs? We distribute the jobs each independently uniformly at random. How to bound the maximum load?

Solution: [1](#)

2. Distributed discrete logarithm algorithm (Breaking the Circuit Size Barrier for Secure Computation Under DDH, Boyle, Gilboa, Ishai linked on the website).

Solution: [2](#)

3. Let A, B be two disjoint sets of vertices where $|A| = |B| = n$. Let $d \geq 5$ be a constant. We choose d uniformly at random edges from each vertex from A . We show that with constant positive probability each set $S \subseteq A$ of size $|S| \leq n/d$ has at least $\beta|S|$ neighbors where $\beta = d/4$.

Solution: [3](#)

1.5 Tutorial

1. Let us define the *edge expansion* for a given graph G by:

$$h(G) = \min_{|S| \leq n/2} \frac{e(S, V \setminus S)}{|S|}$$

For any $S \subseteq V(G)$ we denote

$$e(S) = E(G) \cap S \times S = \text{number of edges inside } S$$

$$e(S, V(G) \setminus S) = E(G) \cap (S \times (V(G) \setminus S)) = \text{number of edges going from } S \text{ to the complement}$$

Let us show that if λ_2 is the second largest eigenvalue of the adjacency matrix of a d -regular graph G then:

$$h(G) \geq \frac{d - \lambda_2}{2}$$

Solution: **1**

2. Show that for any $v \in \mathbb{R}^n$ it holds that

$$\frac{1}{\sqrt{n}} \|v\|_1 \leq \|v\|_2 \leq \|v\|_1$$

Solution: **2**

3. Let μ be a probability distribution, that is $\|\mu\|_1 = 1$ and $\mu_j \geq 0$ (for each $j \in \Omega$). Let us define $d(\mu, \nu)$ the distance of two probability distributions as:

$$d(\mu, \nu) = \frac{1}{2} \sum_{x \in \Omega} |\mu(x) - \nu(x)|$$

Show that:

$$d(\mu, \nu) = \max_{A \subseteq \Omega} \mu(A) - \nu(A)$$

where $\mu(A) = \sum_{x \in A} \mu(x)$.

Solution: **3**

4. Let M be a Markov chain on the set of states S . We say that a Markov chain $Z_t = (X_t, Y_t)$ on the set of states $S \times S$ is a coupling iff

$$\Pr[X_{t+1} = x' \mid Z_t = (x, y)] = \Pr[M_{t+1} = x' \mid M_t = x]$$

(where X_{t+1} is the first coordinate of Z_{t+1})

$$\Pr[Y_{t+1} = y' \mid Z_t = (x, y)] = \Pr[M_{t+1} = y' \mid M_t = y]$$

(where Y_{t+1} is the second coordinate of Z_{t+1})

So one can imagine a coupling as a Markov chain, that in both coordinates behaves in the same way as the original Markov chain (but the coordinates might be dependent on each other).

Let $Z_t = (X_t, Y_t)$ be a coupling of a Markov chain M on the state space S . Suppose there is a T such that:

$$\Pr[X_T \neq Y_T \mid X_0 = x, Y_0 = y] \leq \varepsilon \quad (\text{for all } x, y \in S)$$

then

$$\tau(\varepsilon) \leq T$$

Where formally the mixing time $\tau(\varepsilon)$ is defined as

$$p_x^t = \text{the distribution when starting at } x \text{ and doing } t \text{ steps}$$

$$\tau(\varepsilon) = \max_{x \in S} \min \{t \mid d(p_x^t, \pi) \leq \varepsilon\}$$

Notice that when we prove that $\Pr[X_T \neq Y_T \mid X_0 = x, Y_0 = y] \leq \varepsilon$ for all $x, y \in S$, we know that we are close to the stationary distribution (without even knowing the stationary distribution).

Solution: [4](#)

5. We define the hypercube graph of dimension d as follows: the vertices are binary strings of length d and two vertices are connected by an edge iff they differ in exactly one coordinate. For instance $d = 2$ the graph is

$$(\{00, 01, 10, 11\}, \{(00, 01), (00, 10), (11, 01), (11, 10)\})$$

(the edges are not oriented).

We start at O^d and do the following random walk:

- With probability $1/2$ we stay at the current vertex.
- With probability $1/2$ we choose uniformly at random an index $j \in [d]$ and change the corresponding bit.

The Markov chain is nice (it converges to a single stationary distribution, namely the uniform distribution on all vertices). Our question is how many steps do we need to take until we are “close enough” to the uniform distribution. Show that the random walk has $\tau(\varepsilon) \leq d \ln(d/\varepsilon)$.

Solution: [5](#)

1.6 Tutorial

1. Definition: a random variable – our estimate $A > 0$ is an $\varepsilon - \delta$ approximation of a value $g > 0$ if

$$\Pr[(1 - \varepsilon)g \leq A \leq (1 + \varepsilon)g] \geq 1 - \delta$$

Prove the *Estimator Theorem*: Let U be a finite set and $G \subseteq U$ its subset. We know $|U|$ and wish to estimate $|G|$. If we take n uniformly random and independent samples from U where

$$n \geq \frac{3}{\varepsilon^2 \frac{|G|}{|U|}} \ln(2/\delta)$$

$X =$ number of samples inside of G

and output $A = X \frac{|U|}{n}$ then A is $\varepsilon - \delta$ approximation of $|G|$.

Solution: [1](#)

2. We say that \hat{x} is an ε -approximation of x iff

$$(1 - \varepsilon)x \leq \hat{x} \leq (1 + \varepsilon)x$$

Show that for $\varepsilon < 1/2$ if we have ε -approximation \hat{s} of a number s and ε -approximation \hat{t} of a number t then \hat{s}/\hat{t} is an 4ε -approximation of s/t .

Solution: [2](#)

3. Let $\varepsilon > 0$ be fixed. Find a suitable choice of $\bar{\varepsilon}$ such that if we take $(\hat{a}_i)_{i=1}^n$ of numbers $(a_i)_{i=1}^n$ then $\prod_{i=1}^n \hat{a}_i$ is an ε -approximation of $\prod_{i=1}^n a_i$.

Solution: [3](#)

4. Show an algorithm that given a bipartite graph G (partites consisting of the same number of vertices) determines if the number of perfect matchings is even or odd.

Solution: [4](#)

5. Let $A \in \{0, 1\}^{n \times n}$ be a matrix. Let $\varepsilon_{i,j}$ be independent random ± 1 variables. Let $B \in \{-1, 0, 1\}^{n \times n}$ be a matrix such that $B_{i,j} = \varepsilon_{i,j} A_{i,j}$ (uniformly randomly independently assign signs to entries of A).

(a) Show that $\mathbb{E}[\det(B)] = 0$

(b) Show that $\mathbb{E}[\det(B)^2] = \text{perm}(A)$ (permanent of A)

Solution: [5](#)

6. Let $G = (U \cup V, E)$ be a bipartite graph such that $|U| = |V| = n$ and $\delta(G) > n/2$ (the least degree). Show that for any matching of size at most $n - 1$ there is an augmenting path of length at most 3.

Solution: [6](#)

7. Let $G = (U \cup V, E)$ be a bipartite graph such that $|U| = |V| = n$ and $\delta(G) > n/2$ (the least degree). Show that for any $2 \leq k \leq n$ and a matching m of size k there are at most n^2 matchings m' of size $k - 1$ such that we can get from m' to m using an augmenting path of length at most 3.

Solution: [7](#)

1.7 Tutorial

1. Let $\varepsilon > 0$ be fixed. Find a suitable choice of $\bar{\varepsilon}$ such that if we take $(\hat{a}_i)_{i=1}^n$ of numbers $(a_i)_{i=1}^n$ then $\prod_{i=1}^n \hat{a}_i$ is an ε -approximation of $\prod_{i=1}^n a_i$.

Solution: [1](#)

2. Let $G = (U \cup V, E)$ be a bipartite graph where $|U| = |V| = n$ and $\delta(G) > n/2$. Let r_k be the fraction of k -matchings to $k - 1$ -matchings in G . Let $\alpha \geq 1$ be a real number such that $1/\alpha \leq r_k \leq \alpha$. Pick $N = n^7 \alpha$ elements from $M_k \cup M_{k-1}$ independently uniformly at random. Set \hat{r}_k to the fraction of observed k -matchings to $k - 1$ -matchings. Show that $(1 - 1/n^3) r_k \leq \hat{r}_k \leq (1 + 1/n^3) r_k$ with probability at least $1 - c^{-n}$ for some constant c .

Solution: [2](#)

3. Let $G = (U \cup V, E)$ be a bipartite graph where $|U| = |V| = n$ and $\delta(G) > n/2$. Show that $1/n^2 \leq r_k \leq n^2$.

Solution: [3](#)

4. Let G_k be the graph constructed from $G = (U \cup V, E)$ such that we add $n - k$ vertices to each partite and connect each new vertex with all old vertices in the opposite partite. Show that if R is the fraction of perfect matchings to the number of almost perfect matchings (all but one vertex in each partite is matched) in the new graph G_k then

$$R = \frac{m_k}{m_{k+1} + 2(n - k)m_k + (n - k + 1)^2 m_{k-1}}$$

Solution: [4](#)

5. Show that permanent is in IP.

We say that a language $L \subseteq \{0, 1\}^*$ is in IP if

- The verifier V gets a word $w \in \{0, 1\}^*$, works in polynomial time in $|w|$ and can use random bits.
- The verifier V can communicate with the prover P (which is unbounded).
- We say that $L \in IP$ if there is a prover P and a verifier V such that:
 - Completeness: for each $w \in L$ we have

$$\Pr[V(w) \text{ accepts the proof of } P] \geq 2/3$$

- Soundness: for any $x \notin L$ and any prover Q we have

$$\Pr[V(x) \text{ accepts the proof of } Q] \leq 1/3$$

Show that the decision problem whether $\text{perm}(A) = k$ for a given matrix $A \in \{0, 1\}^{n \times n}$ and $k \in \mathbb{N}$ is in IP.

Our plan: Denote $M^{1,i}$ the matrix M without the first row and i -th column. Denote $D(x)$ the matrix $(n-1) \times (n-1)$ where elements are polynomials of degree n such that $\forall i \in [n]: D(i) = A^{1,i}$. Then permanent of $D(x)$ is a polynomial of degree $n(n-1)$ in variable x .

Notice that:

- We can construct $D(x)$ using interpolation.
- $\text{perm}(M) = \sum_{i=1}^n \text{perm}(M^{1,i})$
- $\text{perm}(M) \leq n! \leq 2^{n^2}$

The protocol:

- If $n \leq 2$ check the answer.
- Let the prover generate a prime p such that $2^{n^2} < p < 2^{2n^2}$ and check that it is really a prime.
- Request polynomial $g \in \mathbb{Z}_p[x]$ of degree at most n^2 such that $g(x) = \text{perm}(D(x))$. Check $k = \sum_{i=1}^n M^{1,i} \text{perm}(D(i))$.
- Pick $a \in \mathbb{Z}_p$ uniformly at random and recursively check that $\text{perm}(D(a)) = g(a)$.

Observe that if $g(x) \neq \text{perm}(D(x))$ then $\Pr_{a \in \mathbb{Z}_p} [g(a) = \text{perm}(D(a))] \leq n^2/p$.

Solution: 5

1.8 Tutorial

1. There are 52 cards. Let us determine how long does it take to shuffle a deck of cards using the following procedure: M_{t+1} pick a random card and put it on top.
 - Determine a suitable coupling.
 - Determine after T steps probability of not converging.

Solution: 1

2. • Let us consider the game of Tick-Tack-Toe on 3×3 grid. Think of an algorithm that plays this game.

- Consider a special case of such a tree: a full binary tree of depth $2k$ where there are boolean variables $x_1, x_2, \dots, x_{2^{2k}}$ in leaves and odd level vertices compute AND and even level vertices compute OR.
 - Show that for any deterministic evaluation algorithm there is an assignment such that our deterministic evaluation needs to query all input variables.
 - Show that using short circuiting (if one of inputs of AND is false return false without querying the other, similarly for OR if one input is true return true immediately) we can create an algorithm with better expected running time.

Solution: [2](#)

3. We will work in a streaming model. That means we are getting data $d_j \in U$ online (we get d_1 , then d_2, \dots, d_n , but we do not know n in advance) and we can use only a very limited amount of memory (say $\mathcal{O}(\log(|U|))$ or $\text{poly}(|U|)$). Say $U = [N] = \{0, 1, 2, \dots, N-1\}$. Create an algorithm to compute each of the following functions and state how many bits of memory you need (each d_j is represented using $\log(N)$ bits):
 - $\max_{j \in [n]} d_j$
 - $\sum_{j \in [n]} d_j$
 - The average $\left(\sum_{j \in [n]} d_j\right) / n$ (preferably without knowing n).

Solution: [3](#)

4. Again one-pass streaming model. Do one pass along the data $d_1, d_2, \dots, d_n \in U$ to find the most frequently occurring element given that it occurs $> n/2$ times. Use as little memory as possible.

Solution: [4](#)

1.9 Tutorial

1. A *boolean circuit* https://en.wikipedia.org/wiki/Boolean_circuit

- We say that a circuit is randomized if it also receives $m(n)$ independent random bits as inputs.
- We say that a family of boolean circuits $(C_n)_{n \in \mathbb{N}}$ computes a function $f: \{0, 1\}^* \rightarrow \{0, 1\}$ if $\forall n \in \mathbb{N} \forall x \in \{0, 1\}^n : C_n(x) = f(x)$.
- We say that a family of randomized circuits computes a function if $f(x) = 0$ then the circuit outputs zero no matter the random bits, if $f(x) = 1$ then the circuit outputs one with probability at least $1/2$ (over its random bits).

Show Adleman's theorem: if a boolean function has a randomized polynomial-sized boolean family, then it has a polynomial-sized boolean family.

Solution: [1](#)

2. Given an array $a \in \mathbb{N}^n$ which is sorted (that is $a[i] \leq a[i+1]$ for any $0 \leq i \leq n-2$) and a number $k \in \mathbb{N}$ determine whether there is index $0 \leq i \leq n-1 : a[i] = k$.
 - (a) Show a fast algorithm.
 - (b) Recall Yao's Minmax Principle.
 - (c) Show a lower bound for the expected number of steps of a randomized algorithm for search in sorted array.

- (d) Can we do better if we assume something about the distribution of the numbers inside the array?

Solution: [2](#)

3. You will use hashing functions in the next lecture. Let us mention few definitions.
- The intuition is that we do not consider a single hash function but rather a set of functions and choose uniformly at random one hash function.
 - We cannot store a random function (too much Shannon entropy, so technically we can but it is never practical) and sampling random function is also not practical.
 - Thus we often choose functions that are very simple to store, evaluate, and sample from.

Let $[m] = \{0, 1, 2, \dots, m - 1\}$.

- A system \mathcal{H} of functions from U to $[m]$ is called *c-universal* for a constant $c \geq 1$ if for each two different $x \neq y \in U$ we have

$$\Pr_{h \leftarrow \mathcal{H}} [h(x) = h(y)] = c/m$$

(When \mathcal{H} is the set of all functions then it is 1 universal.)

Let p be a prime and \mathbb{Z}_p be a field. Let \mathcal{D} be the system of functions from \mathbb{Z}_p^d to \mathbb{Z}_p :

$$\mathcal{D} = \{h_t(x) = \langle t | x \rangle \mid t \in \mathbb{Z}_p^d\}$$

Show that \mathcal{D} is 1-universal.

- A system \mathcal{H} of functions from U to $[m]$ is called *strongly c-universal* (also called *2-independent*) for a constant $c \geq 1$ if for each two different $x \neq y \in U$ and each two slots $a, b \in [m]$ we have

$$\Pr_{h \leftarrow \mathcal{H}} [h(x) = a \wedge h(y) = b] = c/m^2$$

- Why don't we just quantify for each $x \in U$ and each $a \in [m]$

$$\Pr_{h \leftarrow \mathcal{H}} [h(x) = a] = c/m$$

- Let $h_{a,b}(x) = ((ax + b) \bmod p) \bmod m$. Then the system $\mathcal{L} = \{h_{a,b} \mid a, b \in [p]\}$ is strongly 4-universal.

Solution: [3](#)

1.10 Tutorial

1. We have routers (small computers that are sending packets). We want to know what is going on in the network but the routers are not powerful enough to log each packet that goes through them.
 - (a) What if each router logs the incoming packets at random?
 - (b) What kind of family of hash functions do we want to use?
 - (c) It is possible that each packet will be either logged on each router it visits or nowhere? At the same time we wish to log just a predefined fraction of packets (with high probability).

Solution: 1

2. Let $n, m \in \mathbb{N}$ be constants and let $U = \mathbb{Z}_2^n$. Show that

$$\mathcal{H} = \{h_{A,b} \mid A \in \mathbb{Z}_2^{m \times n}, b \in \mathbb{Z}_2^m\} \quad (\text{where } h_{A,b}(x) = Ax + b)$$

is a 2-universal family of hash-functions.

Solution: 2

3. Let us show few useful facts:

- (a) Let X, Y be two random variables which are independent. Show that

$$\mathbb{E}[XY] = \mathbb{E}[X]\mathbb{E}[Y]$$

- (b) Let X, Y be two random variables which are independent. Show that

$$\text{var}(X + Y) = \text{var}(X) + \text{var}(Y)$$

- (c) Let X_1, X_2, \dots, X_n be random variables which are pairwise-independent. Show that

$$\text{var}\left(\sum_{j=1}^n X_j\right) = \sum_{j=1}^n \text{var}(X_j)$$

- (d) Show that for any two real numbers $a, b \in \mathbb{R}$ we have:

$$\text{var}(aX + b) = a^2 \text{var}(X)$$

- (e) Show that if $\mu, \sigma \in \mathbb{R}$ and X_1, X_2, \dots, X_n are random variables with $\mathbb{E}[X_j] = \mu$ and $\text{var}(X_j) = \sigma^2$ then

$$\begin{aligned} \bar{X} &= \frac{1}{n} \sum_{j=1}^n X_j \\ \mathbb{E}[\bar{X}] &= \mu \\ \text{var}[\bar{X}] &= \sigma^2/n \end{aligned}$$

- (f) Median trick: let X_1, X_2, \dots, X_n be independent identically distributed such that $\Pr[X_j < c] \leq 1/4$ and $\Pr[X_j > C] \leq 1/4$ (for some constants $c, C \in \mathbb{R}$). Prove that the median M of X_1, X_2, \dots, X_n satisfies

$$\begin{aligned} \Pr[M < c] &\leq 2e^{-n/8} \\ \Pr[M > C] &\leq 2e^{-n/8} \end{aligned}$$

- (g) Median of means trick: let X_1, X_2, \dots, X_n are pairwise-independent random variables with variance so high we are unable to use the median trick because we cannot meaningfully bound $\Pr[X_j < c \vee X_j > C]$.

Solution: 3

4. Hash functions have also quite some applications in cryptography. Suppose you have a family of hash functions \mathcal{H} where each function is easy to evaluate, but it is hard to find a preimage (or a collision). We review some applications of this notion.

- Signing using hashes or checksums using hashes.
- Blockchain.
- Merkle tree https://en.wikipedia.org/wiki/Merkle_tree

Solution: 4

1.11 Tutorial

1. Analyse the Count-Min Sketch (Section 5.4 in <https://www.cs.dartmouth.edu/~ac/Teach/data-streams-lectnotes.pdf>)

Solution: 1

2. Let us consider approximation of MAX-SAT:

(a) Define MAX-3SAT and MAX-E3SAT:

(b) Think of the simplest randomized algorithm to solve MAX-E3SAT.

(c) What is the least fraction of satisfiable clauses in a E3SAT?

(d) What is the least fraction of satisfiable clauses in a 3SAT (not E3SAT)?

- (e) If we are promised we are given a formula of 3SAT where either at most half or all of the clauses are satisfiable can you determine which case this is?

- (f) If we are promised we are given a formula of 3SAT where either at most 94% or at least 95% of the clauses are satisfiable can you determine which case this is?

Definition (Gap-preserving reduction). *Let Π, Π' be two optimization problems. Then we say that we have an L -reduction from Π to Π' , if there are two real numbers a, b such that:*

- (a) *For any instance $I \in \Pi$ we can in polynomial time output an instance $I' \in \Pi'$,*
 (b) *$OPT(I') \leq aOPT(I)$ and*
 (c) *if we get a solution S' for I' (of value V') we can in polynomial time output a solution S of the instance I (of value V) such that*

$$|OPT(I) - V| \leq b|OPT(I') - V'|.$$

Solution: [2](#)

3. Using the theorem that there is no α -approximation of MAX-E3SAT for any $\alpha > 7/8$ unless $P=NP$ prove that there is no β -approximation for any $\beta > 23/24$ for MAX-LABEL-COVER unless $P=NP$.

MAX LABEL COVER

Input: bipartite graph $G = (V_1, V_2, E)$, sets of labels $L_1, L_2 \subseteq \mathbb{N}$ a collection of relations $(R_e)_{e \in E} \subseteq L_1 \times L_2$

Goal: find labelings $\ell_i: V_i \rightarrow L_i$.

Maximize: $|\{e \in E: e = \{v_1, v_2\}, \{\ell_1(v_1), \ell_2(v_2)\} \in R_e\}|$

Solution: [3](#)

Chapter 2

Theory

2.1 Probability 101

Probability 101

2.2 Markov Chain

Definition. A discrete-time Markov chain is a sequence of random variables X_0, X_1, X_2, \dots with the Markov property:

$$\Pr[X_{n+1} = x \mid X_0 = x_0, X_1 = x_1, \dots, X_n = x_n] = \Pr[X_{n+1} = x \mid X_n = x_n]$$

(if both are defined, i.e., $\Pr[X_0 = x_0, X_1 = x_1, \dots, X_n = x_n] > 0$)

and the possible values of X_i form a countable set called the state space of the Markov chain.

The Markov property states that the process has no memory – the next state depends only on the current state. We will deal with a special case where the state space of each random variable will be the same and finite. Moreover we will deal with time-homogenous Markov chains, that is $\Pr[X_{n+1} \mid X_n] = \Pr[X_n \mid X_{n-1}]$ (the transition probabilities are time independent). Thus we will represent Markov chains by their transition matrices – if a Markov chain has n states its transition matrix is $P \in [0, 1]^{n \times n}$ such that $P_{i,j} = \Pr[X_{n+1} = i \mid X_n = j]$ (thus column sums are equal to one).

If we take a probability distribution $\pi \in [0, 1]^n$ and multiply it by the transition matrix we get the probability distribution after one step $P\pi$.

There are several interesting properties of Markov chains:

- We say that a MC is *irreducible* iff for each pair of states $i, j \in [n]$ there is a time $k \in \mathbb{N}$ such that $(P^k)_{i,j} > 0$ (we can get from any state to any state).
- We say that a MC is *periodic* iff there is a state $i \in [n]$ and a period $p \in \mathbb{N}, p > 1$ such that for each time $k \in \mathbb{N}$ we have $(P^k)_{i,i} > 0 \Rightarrow p \mid k$ that is probability of staying at state i is positive only for multiples of the period.
- We say that $\pi \in [0, 1]^n$ is a *stationary distribution* of a given MC iff $P\pi = \pi$ (the distribution is the same after one step).

Theorem 1. If a MC is aperiodic and irreducible it has a unique stationary distribution π . Moreover for all pairs of states $i, j \in [n]$ we know that

$$\lim_{t \rightarrow \infty} (P^t)_{i,j} = \pi_i$$

Chapter 3

Solutions

3.1 Tutorial

1.

- Can you all hear me?
- If you are uncomfortable asking a question in English, just ask in Czech/Slovak and I will translate.
- Have you all taken:
 - (a) a probability course (discrete probability, random variables, expected value, variance, Markov, Chernoff)
 - (b) a linear algebra course (matrix operations, linear maps, eigenvectors and eigenvalues, discriminant)
 - (c) a graph theory course (what a combinatorial graph is, bipartite, complete, coloring)
 - (d) a combinatorics course (factorial, binomial coefficients)
 - (e) an algorithms / programming course (big-O notation, possibly understanding Python based on the other question)
- This class is heavy on theory. Are you interested in computer simulations and or implementations? If so:
 - (a) Python
 - (b) R
 - (c) C++

2. You are presented with two sealed envelopes. There are k € in one of those and ℓ € in the other ($k, \ell \in \mathbb{N}$ but you do not know k, ℓ in advance). You may open an envelope and (based on what you see) decide to take this one or the other (without looking into both).

- (a) Is there a way how to walk away with the larger amount of money with probability strictly larger than 0.5?

Solution: Pick an envelope uniformly at random. If you see m € toss a fair coin until you get Tails. If the number of tosses was strictly less than m keep the envelope, otherwise take the other. If $k < \ell$ then the probability of keeping the envelope with k € is strictly less than the probability of keeping the envelope with ℓ €.

- (b) What is the expected value you walk away with (in terms of k, ℓ)?

Solution: Let us recall the sum of geometric series:

$$\begin{aligned} S &= \sum_{j=0}^n q^j \\ &= 1 + q + q^2 + \dots + q^n \\ &= 1 + q(1 + q + q^2 + \dots + q^{n-1}) \\ &= 1 + q(S - q^n) \end{aligned}$$

thus

$$\begin{aligned} S &= 1 + q(S - q^n) \\ S - qS &= 1 - q^{n+1} \\ S &= \frac{1 - q^{n+1}}{1 - q} \end{aligned} \quad (\text{pokud } q \neq 1)$$

and for the infinite case:

$$\begin{aligned} \sum_{j=0}^{\infty} q^j &= \lim_{n \rightarrow \infty} \sum_{j=0}^n q^j \\ &= \lim_{n \rightarrow \infty} \frac{1 - q^{n+1}}{1 - q} \\ &= \frac{1}{1 - q} \end{aligned} \quad (\text{pokud } |q| < 1)$$

Thus exactly n tosses have probability for the general case where Tails has probability p and Heads has probability $1 - p$:

$$\Pr[n \text{ tosses}] = (1 - p)^{n-1} p \quad (\text{for any } n \in \mathbb{N}^+)$$

Probability of at most n tosses:

$$\begin{aligned} \Pr[1, 2, \dots, n \text{ tosses}] &= \sum_{j=1}^n p(1 - p)^{j-1} \\ &= p \sum_{j=1}^n (1 - p)^{j-1} \\ &= p \frac{1 - (1 - p)^n}{1 - (1 - p)} \end{aligned}$$

$$= 1 - (1 - p)^n$$

Probability that we keep k € (fair coin):

$$\begin{aligned} \Pr[\text{tosses} < k] &= \sum_{j=1}^{k-1} 0.5^j \\ &= 1 - 0.5^{k-1} \end{aligned}$$

Thus probability of walking away with k € is

$$\begin{aligned} \Pr[\text{winning } k\text{€}] &= \frac{1}{2}(1 - 0.5^{k-1}) + \frac{1}{2}0.5^{\ell-1} \\ &= \frac{1}{2} - 0.5^k + 0.5^\ell \\ &= \frac{1}{2} + (0.5^\ell - 0.5^k) \end{aligned}$$

Thus the expected win is

$$\mathbb{E}[\text{win}] = k \left(\frac{1}{2} + (0.5^\ell - 0.5^k) \right) + \ell \left(\frac{1}{2} + (0.5^k - 0.5^\ell) \right)$$

(c) Simulate.

Solution:

```
# https://docs.python.org/3/library/random.html
# Do not use for cryptography!
from random import randint
from random import random

def geometric(pr: float = 0.5) -> int:
    """pr is success probability, return the number of tosses until
    the first success."""
    assert pr > 0
    sample = 1
    fail_pr = 1 - pr
    while random() < fail_pr:
        sample += 1
    return sample

# Our unknown amounts.
envelopes = [5, 10]

N = 1000000          # Number of samples.
total_amount = 0    # Total sum that we got during all samples.
got_larger = 0      # Number of times we walked away with the larger sum.

for _ in range(N):
    # Pick the first envelope at random.
    chosen = randint(0, 1)
```

```
if geometric() < envelopes[chosen]:
    # Keep this one.
    pass
else:
    # Choose the other.
    chosen = 1 - chosen
if envelopes[chosen] >= envelopes[1 - chosen]:
    got_larger += 1
total_amount += envelopes[chosen]

k = envelopes[0]
l = envelopes[1]
pr_larger = 0.5 + abs(0.5**k - 0.5**l)
e_win = k * (0.5 + (0.5**l - 0.5**k)) + l * (0.5 + (0.5**k - 0.5**l))

print(f'Pr[selected larger] = {got_larger / N} (={pr_larger})')
print(f'E[win] = {total_amount / N} (={e_win})')

# Possible outcome:
# Pr[selected larger] = 0.529865 (=0.5302734375)
# E[win] = 7.649325 (=7.6513671875)
```


3. **Graph isomorphism.** You have seen an interactive proof of graph non-isomorphism on the class. Can you come up with an interactive proof of graph isomorphism?

Solution:

- Both the prover P and the verifier V know two graphs G_1, G_2 .
- The prover knows an isomorphism π such that $\pi(G_1) = G_2$. Formally $\pi: V(G_1) \rightarrow V(G_2)$ such that

$$(u, v) \in E(G_1) \Leftrightarrow (\pi(u), \pi(v)) \in E(G_2).$$

And by $\pi(G_1)$ we mean the graph $(\pi(V(G_1)), \{(\pi(u), \pi(v)) \mid (u, v) \in E(G_1)\})$.

- For ease of presentation we set $V(G_1) = V(G_2) = [n] = \{1, 2, 3, \dots, n\}$.
- The prover picks uniformly random permutation $\sigma \in S_n$ and sends the graph $G = \sigma(G_1)$.
- The verifier picks uniformly random number $i \in \{1, 2\}$ and asks verifier to present a permutation τ such that $\tau(G) = G_i$.
- If $i = 1$ then the prover sends $\tau = \sigma^{-1}$. If $i = 2$ then the prover sends $\tau = (\sigma \circ \pi)^{-1}$.

This is indeed an interactive proof:

- If the prover knows the isomorphism π , then all answers are correct.
- If G_1, G_2 are not isomorphic, then the verifier will pick a graph (either G_1 or G_2) which is not isomorphic with G with probability $1/2$.

Again the prover learns nothing about the isomorphism. If you find these interactive proofs interesting, take a look at “Zero Knowledge Proofs”.

Also note that our prover can be implemented efficiently as opposed to the case of graph non-isomorphism. In fact in some sense the prover proves that it knows the isomorphism (this can be made formal, see “Zero Knowledge Proofs of Knowledge”).

It is natural to repeat this protocol more times in order to boost the probabilities. This is called probability amplification. We will investigate this much more during the semester.

4. We will focus on random walks and their properties a lot.
- (a) Random walks are useful when analysing algorithms – “two coloring without monochromatic triangle” of three-colorable graph.
 - (b) Random numbers in the computer are often expensive to generate, can we reduce number of used random bits (expanders)? Or even get a deterministic algorithm?
 - (c) To sample from extremely large spaces.

Let $n \in \mathbb{N}$, say $n = 30$. Let us the following problem we start with $X_0 = \lfloor n/2 \rfloor$ and do the following process:

- if $X_i \in \{0, n\}$ we stop
 - we set $X_{i+1} = X_i + \delta$ where δ is picked uniformly at random from $\{-1, 1\}$
- (a) Is this a Markov chain (Definition 2.2)? If so can you write it’s matrix?

Solution: Yes (see the lecture video).

- (b) What is the expected number of steps until stopping?

Solution: Let us set

$$S_k = \mathbb{E}[\text{number of steps untill stopping, when starting at } k]$$

We know the following:

$$\begin{aligned} S_0 = S_n &= 0 \\ S_k &= 1 + \frac{1}{2}(S_{k-1} + S_{k+1}) \end{aligned} \quad (\text{by linearity of expectation})$$

The above is so-called difference equation. It is not terribly complicated, but not super easy to solve (hint try to consider equations for $d(k) = S_k - S_{k-1}$ to get rid of the “1+” term). You may look at https://en.wikipedia.org/wiki/Recurrence_relation Luckily when dealing with asymptotics thus we do not need exact estimates. And you will see some nice theoretical results tomorrow.

But it can be shown that

$$S_k = k(n - k)$$

which we can easily check that this is indeed a solution (note that we would also need that this is a unique solution, see solution methods on Wikipedia for this part):

$$\begin{aligned} S_k &= 1 + \frac{1}{2}(S_{k-1} + S_{k+1}) \\ S_k &= 1 + \frac{1}{2}((k-1)(n-(k-1)) + (k+1)(n-(k+1))) \\ S_k &= 1 + \frac{1}{2}((k-1)n - (k-1)^2 + (k+1)n - (k+1)^2) \\ S_k &= 1 + \frac{1}{2}(2kn - (k-1)^2 - (k+1)^2) \\ S_k &= 1 + \frac{1}{2}(2kn - 2k^2 - 2) \\ S_k &= k(n - k) \end{aligned}$$

5. Think of some example MCs.

(a) Create a MC that is irreducible.

Solution: Two states:

$$\begin{pmatrix} 1/2 & 1/2 \\ 1/2 & 1/2 \end{pmatrix}$$

(with probability 1/2 stay at the current state, with probability 1/2 switch to the other state).

(b) Create a MC that is not irreducible.

Solution: Two states:

$$\begin{pmatrix} 1 & 1 \\ 0 & 0 \end{pmatrix}$$

(always stay at the first state or immediately go there).

(c) Create a MC that is periodic.

Solution: Three states:

$$\begin{pmatrix} 0 & 1 & 0 \\ 0 & 0 & 1 \\ 1 & 0 & 0 \end{pmatrix}$$

(from the first state go always to the third, from the second always to the first and from the third always to the second).

(d) Create a MC that is not periodic.

Solution: Two states:

$$\begin{pmatrix} 1/2 & 1/2 \\ 1/2 & 1/2 \end{pmatrix}$$

(with probability 1/2 stay at the current state, with probability 1/2 switch to the other state).

(e) Compute a stationary distribution of the following MC:

$$\begin{pmatrix} 1/2 & 1/2 \\ 1/2 & 1/2 \end{pmatrix}$$

Solution: One eigenvalue is 1, the only stationary distribution $(1/2, 1/2)^T$. The other eigenvalue is 0 with the corresponding eigenvector $(1, -1)^T$ (this is not a distribution).

(f) Create a MC that has more stationary distributions.

Solution: Two states:

$$\begin{pmatrix} 1 & 0 \\ 0 & 1 \end{pmatrix}$$

(always stay where we are).

6. We are collectors and we want to collect all n kinds of coupons. Coupons are sold in packages which all look the same. Thus when we buy an coupon, we buy one of n kinds uniformly at random. This is known as the *coupon collector* problem.

- (a) What is the expected number of coupons we need to buy to get all kinds?

Solution: Let t_i be the time to collect the i -th coupon kind after we have collected $i - 1$ coupons. The probability of buying the i -th coupon is

$$\Pr[\text{getting } i\text{-th coupon when already having } i - 1 \text{ coupons}] = \frac{n - (i - 1)}{n}$$

Thus t_i has geometric distribution (we are tossing the same probability and waiting for the first success). The expected value of t_i is:

$$\mathbb{E}[t_i] = \frac{n}{n - (i - 1)}$$

By linearity of expectation:

$$\begin{aligned} \mathbb{E}[\text{collecting}] &= \mathbb{E}[t_1 + t_2 + \dots + t_n] \\ &= \mathbb{E}[t_1] + \mathbb{E}[t_2] + \dots + \mathbb{E}[t_n] \\ &= \frac{n}{n} + \frac{n}{n-1} + \frac{n}{n-2} + \dots + \frac{n}{n-(n-1)} \\ &= nH_n \\ &= n \log(n) + n \cdot 0.577\dots + 1/2 + \mathcal{O}(1/n) \quad (\text{source Wikipedia}) \end{aligned}$$

- (b) How many coupons do we need to buy to have probability at least $1 - q$ of collecting all kinds?

Solution: We can use Markov inequality $\Pr[T > nH_n/q] \leq q$ (here T is the random variable telling us how many tosses are necessary).

- (c) What is the Markov chain? Is this similar to a random walk on some graph?

Solution: There might be more Markov chains corresponding to this problem. The states could be all subsets of $[n] = \{1, 2, 3, \dots, n\}$ (too big – not that nice to work with) or how many coupons have we collected so far (much smaller).

This corresponds to the cover time of a complete graph (when we have loops in each vertex).

- (d) Simulate.

Solution:

```
import matplotlib.pyplot as plt
from collections import Counter
from random import randint

def catch_them_all(n: int = 50) -> int:
    coupons = [False] * n
    coupons_collected = 0
    coupons_bought = 0
    while coupons_collected < len(coupons):
        new_coupon = randint(0, len(coupons) - 1)
```

```
coupons_bought += 1
if not coupons[new_coupon]:
    coupons[new_coupon] = True
    coupons_collected += 1
return coupons_bought

cnt = Counter(catch_them_all(50) for _ in range(10000))
plt.bar(cnt.keys(), cnt.values())
plt.xlabel("Steps untill collecting all 50 coupons")
plt.ylabel("How many times did we take this many steps")
# plt.show()
plt.savefig('coupon_collector.pdf')
```

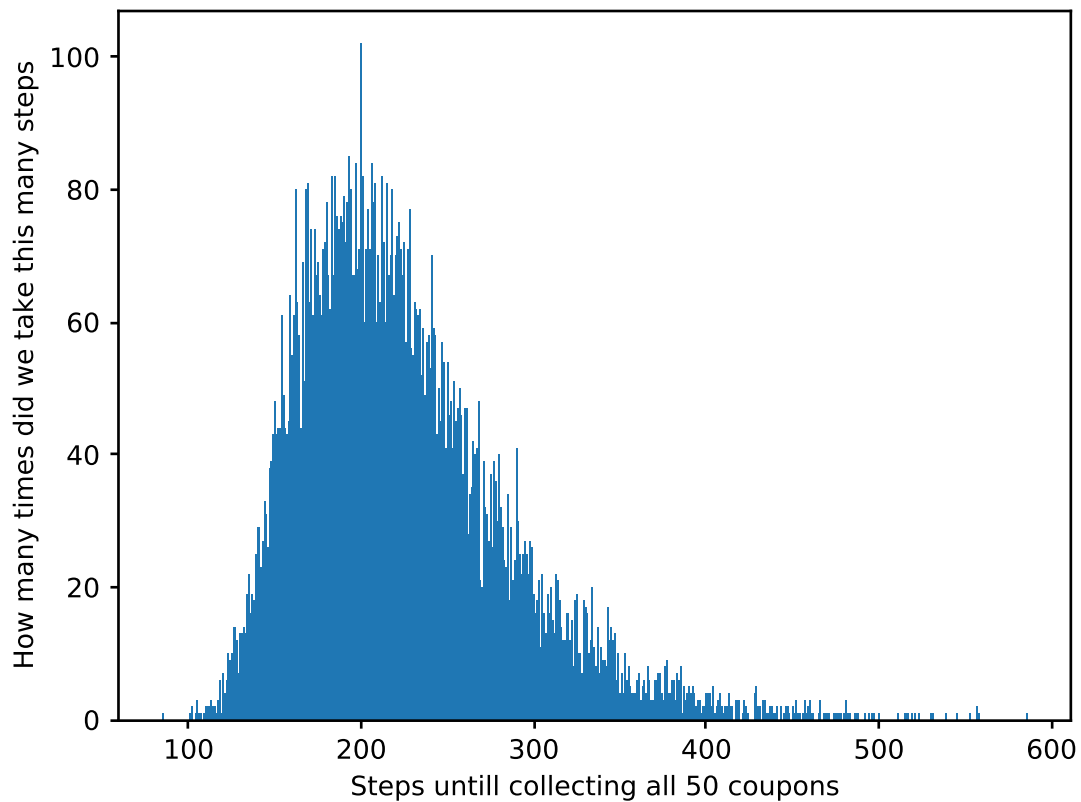


Figure 3.1: A histogram of how many steps were necessary (say 200 steps was necessary around 80 times).

3.2 Tutorial

1. Find a family of oriented graphs of constant in-degree and constant out-degree and as large hitting time as possible.

Solution: Let us first do constant out-degree and unbounded in-degree. We will later use a tree to achieve constant in-degree.

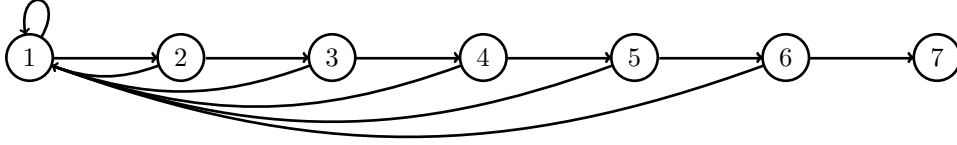


Figure 3.2: Oriented path with backwards arcs (oriented edges).

The expected hitting time from

$$h_{n,n} = 0$$

$$h_{n-1,n} = 1 + 0.5h_{1,n}$$

$$\begin{aligned} h_{n-2,n} &= 1 + 0.5(h_{1,n} + h_{n-1,n}) \\ &= 1 + 0.5(h_{1,n} + (1 + 0.5h_{1,n})) \\ &= 1.5 + 0.75h_{1,n} \end{aligned}$$

$$h_{n-3,n} = 1 + 0.5(h_{1,n} + (1 + 0.5(h_{1,n} + (1 + 0.5h_{1,n}))))$$

$$\begin{aligned} h_{n-k,n} &= \left(\sum_{j=0}^{k-1} 0.5^j \right) + \left(h_{1,n} \sum_{j=1}^k 0.5^j \right) \\ &= 2 - 2^{1-k} + h_{1,n}(1 - 2^{-k}) \end{aligned}$$

Thus in particular when $k = n - 1$:

$$\begin{aligned} h_{1,n} &= 2 - 2^{1-(n-1)} + h_{1,n}(1 - 2^{-(n-1)}) \\ 2^{-(n-1)}h_{1,n} &= 2 - 2^{1-(n-1)} \\ h_{1,n} &= 2^{n-1}(2 - 2^{1-(n-1)}) \\ &= 2^n - 2 \end{aligned}$$

Note that similar situation could happen on undirected graphs where the probabilities of traversing edge one way and the other way would not be the same. Which is in principle almost an oriented graph.

2. Let $A \in \mathbb{R}^{n \times n}$ be a matrix with eigenvalues $\lambda_1, \dots, \lambda_n$. Show that the matrix $A + dI_n$ has eigenvalues $d + \lambda_1, \dots, d + \lambda_n$.

Solution: Eigenvalues and eigenvectors recap:

- We are interested in the limit of a Markov chain. When π_0 is the initial distribution, then $P^n \pi_0$ is the distribution after n steps.
- When we are iteratively multiplying a vector by a matrix from left, the simplest form we can hope for are eigenvectors, which satisfy

$$Ax = \lambda x$$

Where A is a square matrix, λ is a real number called the *eigenvalue*, x is called the *eigenvector*. Then

$$A^n x = A(A^{n-1}x) = \lambda^n x$$

- For small matrices we usually use the characteristic polynomial:

$$\det(A - \lambda I) = 0$$

the roots of this polynomial are the eigenvalues and we find the corresponding eigenvectors as:

$$A - \lambda I = \vec{0}$$

- For an eigenvalue λ we define its *algebraic* multiplicity to be the multiplicity of λ as the root of the characteristic polynomial.
- For an eigenvalue λ we define its *geometric* multiplicity to be the dimension of

$$\text{Ker}(A - \lambda I).$$

- We know that for any eigenvalue algebraic multiplicity is at least the geometric multiplicity.
- For each eigenvalue there is at least one eigenvector.
- It is usually infeasible to find roots of the characteristic polynomial when the matrix A is large. There are however computationally efficient methods of computing eigenvalues and eigenvectors (usually iterative multiplication converges to the eigenvector).

We use the definition, let λ be an eigenvalue in question and x its corresponding eigenvector:

$$\begin{aligned} Ax &= \lambda x \\ (A + dI)x &= Ax + dIx \\ &= \lambda x + dx \\ &= (\lambda + d)x \end{aligned}$$

Note that this can be rather useful when computing eigenvalues of a given matrix.

3. **Show Courant-Fisher:** Let $A \in \mathbb{R}^{n \times n}$ be a symmetric matrix ($A^T = A$). Let $\lambda_1 \geq \lambda_2 \geq \dots \geq \lambda_n$ be its eigenvalues. Show

(a) $\lambda_1 = \max_{x \in \mathbb{R}^n, \|x\|=1} x^T A x$

Solution: Since A is Hermitian, we know that it is diagonalizable and we can choose an orthonormal basis of eigenvectors u_1, u_2, \dots, u_n . That is for any j we have $u_j^T u_j = 1$ and $A u_j = \lambda_j u_j$, and for any $i \neq j$ we have $u_j^T u_i = 0$.

We show two inequalities:

$$\begin{aligned} \max_{x \in \mathbb{R}^n, \|x\|=1} x^T A x &\geq u_j^T A u_j \\ &= u_j^T \lambda_j u_j \\ &= \lambda_j \end{aligned}$$

On the other hand we may write $x = \alpha_1 u_1 + \alpha_2 u_2 + \dots + \alpha_n u_n$ and thus get

$$\begin{aligned} \max_{x \in \mathbb{R}^n, \|x\|=1} x^T A x &= (\alpha_1 u_1 + \alpha_2 u_2 + \dots + \alpha_n u_n)^T A (\alpha_1 u_1 + \alpha_2 u_2 + \dots + \alpha_n u_n) \\ &= (\alpha_1 u_1 + \alpha_2 u_2 + \dots + \alpha_n u_n)^T (\lambda_1 \alpha_1 u_1 + \lambda_2 \alpha_2 u_2 + \dots + \lambda_n \alpha_n u_n) \\ &= \lambda_1 \alpha_1^2 + \lambda_2 \alpha_2^2 + \dots + \lambda_n \alpha_n^2 \quad (\text{since } u_j^T u_i = 0 \text{ and } u_j^T u_j = 1) \\ &\leq \lambda_1 \end{aligned}$$

Where the last equation follows from the fact that if Q is orthogonal matrix ($Q^T Q = I$) then $\|x\| = \|Qx\|$ since $\|x\| = x^T x$ and $\|Qx\| = x^T Q^T Q x$.

(b) $\lambda_n = \min_{x \in \mathbb{R}^n, \|x\|=1} x^T A x$

Solution: Consider $-A$ and use the previous result.

- (c) **The eigenvalue λ_2 can be computed similarly** $\lambda_2 = \max_{x \in \mathbb{R}^n, \|x\|=1, x^T u_1=0} x^T A x$ (where u_1 is the eigenvector corresponding to λ_1). **We can get other eigenvalues in a similar manner. Moreover we could use this to prove the interlacing theorem. See https://en.wikipedia.org/wiki/Min-max_theorem**

4. **Show that a connected d -regular graph is bipartite iff the least eigenvalue of its adjacency matrix is $-d$.**

Solution: We know that the largest eigenvalue of the adjacency matrix of a d -regular graph is d and there is a corresponding eigenvector $(1, 1, \dots, 1)^T$.

If the graph is bipartite (that is $V(G) = A \cup B$ and $E(G) \subseteq A \times B$), we may use the vector defined as follows:

$$x_v = \begin{cases} -1 & \text{if } v \in A \\ 1 & \text{if } v \in B \end{cases}$$

Then x is an eigenvector corresponding to $-d$.

Let $(x_1, x_2, \dots, x_n)^T$ be the eigenvector corresponding to $-d$. Thus

$$-dx_i = \sum_{j \in N(i)} x_j$$

Let $M = \max_i |x_i|$ and $P = \{i \mid x_i = M\}$ and $N = \{i \mid x_i = -M\}$. Without loss of generality let P be non-empty. For any $i \in P$ we have

$$-dM = \sum_{j \in N(i)} x_j$$

thus $x_j = -M$ for each $j \in N(i)$ (since each $|x_k| \leq M$).

Since the graph is connected we eventually get that for any i it holds that $|x_i| = M$.

Eigenvalues of the graph of neurons in human brain have been considered in epilepsy – they studied “how much” is the brain bipartite, which can be expressed by the difference between the smallest eigenvalue and the negative degree.

5. Compute the eigenvalues and eigenvectors of the following graphs:

(a) K_n , the complete graph on n vertices.

Solution: It will be easier to determine eigenvalues and eigenvectors of a complete graph with selfloops (we add unit matrix). We may subtract ones if we mind the selfloops.

The adjacency matrix of a complete graph with selfloops is:

$$A = \begin{pmatrix} 1 & 1 & 1 & 1 & 1 \\ 1 & 1 & 1 & 1 & 1 \\ 1 & 1 & 1 & 1 & 1 \\ 1 & 1 & 1 & 1 & 1 \\ 1 & 1 & 1 & 1 & 1 \end{pmatrix}$$

By the observation from the lecture we know that this is a regular graph and the matrix above has eigenvalue n with eigenvector $(1, 1, 1, 1, 1)^T$. By Hamiltonicity we know that all other eigenvectors are perpendicular to the one above. Thus all their entries sum up to zero.

We guess other eigenvectors (we need to guess $n - 1$ of them).

$$\begin{pmatrix} 1 & 1 & 1 & 1 & 1 \\ 1 & 1 & 1 & 1 & 1 \\ 1 & 1 & 1 & 1 & 1 \\ 1 & 1 & 1 & 1 & 1 \\ 1 & 1 & 1 & 1 & 1 \end{pmatrix} \begin{pmatrix} 1 \\ -1 \\ 0 \\ 0 \\ 0 \end{pmatrix} = \begin{pmatrix} 0 \\ 0 \\ 0 \\ 0 \\ 0 \end{pmatrix}$$

$$\begin{pmatrix} 1 & 1 & 1 & 1 & 1 \\ 1 & 1 & 1 & 1 & 1 \\ 1 & 1 & 1 & 1 & 1 \\ 1 & 1 & 1 & 1 & 1 \\ 1 & 1 & 1 & 1 & 1 \end{pmatrix} \begin{pmatrix} 1 \\ 0 \\ -1 \\ 0 \\ 0 \end{pmatrix} = \begin{pmatrix} 0 \\ 0 \\ 0 \\ 0 \\ 0 \end{pmatrix}$$

$$\begin{pmatrix} 1 & 1 & 1 & 1 & 1 \\ 1 & 1 & 1 & 1 & 1 \\ 1 & 1 & 1 & 1 & 1 \\ 1 & 1 & 1 & 1 & 1 \\ 1 & 1 & 1 & 1 & 1 \end{pmatrix} \begin{pmatrix} 1 \\ 0 \\ 0 \\ -1 \\ 0 \end{pmatrix} = \begin{pmatrix} 0 \\ 0 \\ 0 \\ 0 \\ 0 \end{pmatrix}$$

$$\begin{pmatrix} 1 & 1 & 1 & 1 & 1 \\ 1 & 1 & 1 & 1 & 1 \\ 1 & 1 & 1 & 1 & 1 \\ 1 & 1 & 1 & 1 & 1 \\ 1 & 1 & 1 & 1 & 1 \end{pmatrix} \begin{pmatrix} 1 \\ 0 \\ 0 \\ 0 \\ -1 \end{pmatrix} = \begin{pmatrix} 0 \\ 0 \\ 0 \\ 0 \\ 0 \end{pmatrix}$$

Thus geometric (and thus also the algebraic) multiplicity of eigenvalue 0 is $n - 1$.

(b) $K_{n,n}$, the complete bipartite graph with partites of size n each.

Solution: Here we are happy with no selfloops (otherwise the graph would not even be bipartite).

$$\begin{pmatrix} 0 & 0 & 0 & 1 & 1 & 1 \\ 0 & 0 & 0 & 1 & 1 & 1 \\ 0 & 0 & 0 & 1 & 1 & 1 \\ 1 & 1 & 1 & 0 & 0 & 0 \\ 1 & 1 & 1 & 0 & 0 & 0 \\ 1 & 1 & 1 & 0 & 0 & 0 \end{pmatrix}$$

The graph is bipartite and regular, thus we know that the largest eigenvalue is n with the eigenvector $(1, 1, 1, 1, 1, 1)^T$ the smallest eigenvalue is $-n$ with the eigenvector $(-1, -1, -1, 1, 1, 1)^T$. As with the complete graph with selfloops it is easy to show that the rest is zero eigenvalues with corresponding vectors.

(c) C_n , the cycle on n vertices.

Solution: If we knew circular matrices we could use their properties. We will write the adjacency matrix as a sum of two simpler matrices:

$$\begin{pmatrix} 0 & 1 & 0 & 0 & 0 & 1 \\ 1 & 0 & 1 & 0 & 0 & 0 \\ 0 & 1 & 0 & 1 & 0 & 0 \\ 0 & 0 & 1 & 0 & 1 & 0 \\ 0 & 0 & 0 & 1 & 0 & 1 \\ 1 & 0 & 0 & 0 & 1 & 0 \end{pmatrix} = \begin{pmatrix} 0 & 0 & 0 & 0 & 0 & 1 \\ 1 & 0 & 0 & 0 & 0 & 0 \\ 0 & 1 & 0 & 0 & 0 & 0 \\ 0 & 0 & 1 & 0 & 0 & 0 \\ 0 & 0 & 0 & 1 & 0 & 0 \\ 0 & 0 & 0 & 0 & 1 & 0 \end{pmatrix} + \begin{pmatrix} 0 & 1 & 0 & 0 & 0 & 0 \\ 0 & 0 & 1 & 0 & 0 & 0 \\ 0 & 0 & 0 & 1 & 0 & 0 \\ 0 & 0 & 0 & 0 & 1 & 0 \\ 0 & 0 & 0 & 0 & 0 & 1 \\ 1 & 0 & 0 & 0 & 0 & 0 \end{pmatrix}$$

Observe that moreover the two matrices are inverse to each other, thus their eigenvalues are inverses as:

$$\begin{aligned} Ax &= \lambda x \\ x &= Ax \\ &= A^{-1}Ax \\ &= \lambda A^{-1}x \end{aligned}$$

Let $\omega \in \mathbb{C}$ be the primitive n -th root of unity. Thus $\omega = e^{2i\pi/n}$.

$$\begin{pmatrix} 0 & 0 & 0 & 0 & 0 & 1 \\ 1 & 0 & 0 & 0 & 0 & 0 \\ 0 & 1 & 0 & 0 & 0 & 0 \\ 0 & 0 & 1 & 0 & 0 & 0 \\ 0 & 0 & 0 & 1 & 0 & 0 \\ 0 & 0 & 0 & 0 & 1 & 0 \end{pmatrix} \begin{pmatrix} \omega^0 \\ \omega^1 \\ \omega^2 \\ \omega^3 \\ \omega^4 \\ \omega^5 \end{pmatrix} = \begin{pmatrix} \omega^5 \\ \omega^0 \\ \omega^1 \\ \omega^2 \\ \omega^3 \\ \omega^4 \end{pmatrix} = \omega^5 \begin{pmatrix} \omega^0 \\ \omega^1 \\ \omega^2 \\ \omega^3 \\ \omega^4 \\ \omega^5 \end{pmatrix}$$

Similarly for the even powers

$$\begin{pmatrix} 0 & 0 & 0 & 0 & 0 & 1 \\ 1 & 0 & 0 & 0 & 0 & 0 \\ 0 & 1 & 0 & 0 & 0 & 0 \\ 0 & 0 & 1 & 0 & 0 & 0 \\ 0 & 0 & 0 & 1 & 0 & 0 \\ 0 & 0 & 0 & 0 & 1 & 0 \end{pmatrix} \begin{pmatrix} \omega^0 \\ \omega^2 \\ \omega^4 \\ \omega^0 \\ \omega^2 \\ \omega^4 \end{pmatrix} = \begin{pmatrix} \omega^4 \\ \omega^0 \\ \omega^2 \\ \omega^4 \\ \omega^0 \\ \omega^2 \end{pmatrix} = \omega^4 \begin{pmatrix} \omega^0 \\ \omega^2 \\ \omega^4 \\ \omega^0 \\ \omega^2 \\ \omega^4 \end{pmatrix}$$

And so on. A particular eigenvector is an eigenvector of the eigenvalue ω^j with respect to this matrix and of eigenvalue ω^{-j} with respect to the inverse matrix. Thus when we sum the two matrices we get that the eigenvalue is $\omega^j + \omega^{-j}$. Observe that $\omega^j + \omega^{-j} \in \mathbb{R}$.

3.3 Tutorial

1. You are given two coins. One is fair and the other one has $\Pr[\text{tails}] = 1/4$. We use the following algorithm to distinguish those:

- Pick a coin and toss it n times.
- Let \hat{p} be the probability of getting a tails (number of tails over n).
- If $\hat{p} \geq 3/8$ we say this coin is fair.

Show that if $n \geq 32 \ln(2/\delta)$ then our algorithm answers correctly with probability at least $1 - \delta$.

Solution: Each coin is independent 0, 1 random variable. We could have used the statement to get a similar bound:

$$\Pr[X \leq (1 - \delta)\mu] \leq e^{-\delta^2 \mu/2}$$

$$\Pr[X \geq (1 + \delta)\mu] \leq e^{-\delta^2 \mu/3}$$

but the following is a bit more convenient for us here:

$$\Pr[X \geq \mu + \delta n] \leq e^{-2n\delta^2}$$

$$\Pr[X \leq \mu - \delta n] \leq e^{-2n\delta^2}$$

- If we were tossing the fair coin the probability of failure is

$$\mu = n/2$$

$$\delta = 1/8$$

$$\Pr[X \leq n/2 - n/8] \leq e^{-2 \cdot 32 \ln(2/\delta)(1/8)^2}$$

$$\Pr[X \leq 3n/8] \leq e^{-\ln(2/\delta)}$$

$$\leq \delta/2$$

- If we were tossing the tipped coin the probability of failure is

$$\mu = n/4$$

$$\delta = 1/8$$

$$\Pr[X \geq n/4 + n/8] \leq e^{-2 \cdot 32 \ln(2/\delta)(1/8)^2}$$

$$\Pr[X \geq 3n/8] \leq e^{-\ln(2/\delta)}$$

$$\leq \delta/2$$

2. You have seen that $ZPP = RP \cap \text{co-RP}$.

(a) Recall definitions of:

• **RP**

Solution: A language $L \subseteq \{0,1\}^*$ is in RP ($L \in RP$) iff there is a probabilistic Turing machine A such that:

- A works in polynomial time in the input length (that is $A(x)$ works in time $|x|$ for any $x \in \{0,1\}^*$).
- If $x \notin L$ then $A(x) = 0$ always.
- If $x \in L$ then $\Pr[A(x) = 1] \geq 1/2$ (the randomness is over the random bits of A).

• **ZPP**

Solution: A language $L \subseteq \{0,1\}^*$ is in ZPP ($L \in ZPP$) iff there is a probabilistic Turing machine A such that:

- $A(x) = 1$ if and only if $x \in L$
- A works in expected polynomial time (expectation is over the random bits of A).

• **co-RP**

Solution: L is in co-RP iff $\{0,1\}^* \setminus L$ is in RP.

• **BPP**

Solution: L is in BPP iff there is a probabilistic Turing machine A such that:

- A works in polynomial time
- If $x \in L$ then $\Pr[A(x) = 1] \geq 3/4$.
- If $x \notin L$ then $\Pr[A(x) = 0] \geq 3/4$.

• **NP**

Solution: L is in NP if there is a deterministic Turing machine A such that:

- A works in polynomial time in the input length (sum of input length and certificate length).
- If $x \in L$ then there is $c \in \{0,1\}^*$ such that $|c|$ is polynomial in $|x|$ and $A(x, c) = 1$.
- If $x \notin L$ then for any $c \in \{0,1\}^*$ we have $A(x, c) = 0$.

(b) Show that $RP \subseteq NP$ (and thus $\text{co-RP} \subseteq \text{co-NP}$).

Solution: The random bits can serve as the certificate.

(c) Decide if $BPP = \text{co-BPP}$.

Solution: Yes, we can create B that on any x answers $1 - A(x)$.

(d) Show that if $NP \subseteq BPP$ then $NP=RP$.

Solution: We already know that $RP \subseteq NP$ (unconditionally), we thus need the other inclusion.

We know that 3SAT is NP-complete (if we can solve 3SAT, we can solve anything in NP). Thus it is enough to show that given A which is the BPP Turing machine for 3SAT we can do the following:

- If A rejects, reject.
- If A accepts, we hope the given formula is satisfiable and try to find an assignment:
 - Say the given formula φ has n variables.
 - If φ is satisfiable even if we set $x_1 = \text{True}$, we set it to True (otherwise to False).
 - We continue with x_2, x_3, \dots, x_n .
 - Return $\varphi(x_1, x_2, \dots, x_n)$.

We need to be certain-enough when deciding the variables. Thus we run A multiple times – $\mathcal{O}(\log(n))$ times and take the majority answer to get probability $1 - 1/100n$ of correct answer. By union bound we get that probability of an error in any fixing of x_1, x_2, \dots, x_n is at most $1/100$.

Determine the constant before the $\log(n)$ using a Chernoff bound.

3. How to simulate a fair coin using a tipped coin and vice versa.

- (a) We are given a fair coin $\Pr[\text{tails}] = 0.5$. Show how to generate a random bit with $\Pr[1] = p$ for a given $p \in (0, 1)$ (both $p = 0$ and $p = 1$ are a bit boring).

Solution: Note that if the given p does not have finite binary representation there is no number T such that it would be enough to do at most T tosses. If at most T tosses would suffice, then imagine a tree of toss results. Any leaf is at depth at most T . In any leaf we output either 1 or 0. Probability of getting to a leaf is a multiple of 2^{-T} (not all leaves might be at the same depth).

Say that $p = 0.p_1p_2p_3\dots$ where p_j are binary digits. We treat the fair coin tosses as digits of a random number q . We toss until $q > p$ in which case we output 0 or we are sure that $q \leq p$ no matter the following tosses in which case we output 1.

After each toss the probability of outputting is one half. Thus the expected number of tosses is constant.

- (b) We are given a tipped coin – we do not even know $p = \Pr[\text{tails}]$. We are sure that $\Pr[\text{tails}] \in (0, 1)$. Generate a fair coin toss.

Solution: Algorithm:

- We toss twice.
- If the outcome was Heads, Tails we output 0.
- If the outcome was Tails, Heads we output 1.
- If the outcome was Heads, Heads or Tails, Tails we repeat.

We know that:

- Probability of outputting 0 is $p(1-p)$.
- Probability of outputting 1 is $(1-p)p = p(1-p)$.
- Probability of outputting is $2p(1-p) > 0$. Thus the expected number of rounds is $\frac{1}{2p(1-p)}$, which is finite for any $p \in (0, 1)$.

4. **Show that the expected number of comparisons a quick-sort algorithm does is roughly $n \ln(n)$. Show that probability of it making at least $32n \ln(n)$ comparisons is at most $1/n^3$.**

Solution: Our plan is to:

- Observe that if the total depth of recursion is k then the number of comparisons is upper bounded by kn (since each level of recursion causes at most n comparisons).
- Compute the probability that a fixed element is present in $> 32 \ln(n)$ levels of recursion.
- Use union bound to bound the probability there is an element which is present in $> 32 \ln(n)$ levels of recursion.

Let us do the second item.

- Let us fix an element s .
- Let $S_1 = n$, S_j be the size of the array containing s on the j -th level of recursion. Observe that at the end of recursion $S_k = 1$.
- We say that the j -th recursion is “lucky” if $S_{j+1} \leq (3/4)S_j$.
- Let us define an indicator variable X_j to denote if the j -th recursion is “lucky.” Observe that $\Pr[X_j] = 1/2$ and X_i, X_j are independent for any $i \neq j$.
- After r lucky recursions in the first k levels we know that $S_k \leq (3/4)^r n$.
- So after $4 \ln(n) \geq \log_{3/4}(n)$ lucky recursions the element s is contained in an array of length one (and thus the recursion stops).
- Number of lucky rounds is equal to $X = \sum_{j=1}^{32 \ln(n)} X_j$. The expected number of lucky rounds is $\mu = 16 \ln(n)$. Let us set $\delta = 3/4$ and use Chernoff bound (independent indicator variables):

$$\begin{aligned} \Pr[X \leq (1 - \delta)\mu] &\leq e^{-\delta^2 \mu / 2} && \text{(the form we are using)} \\ \Pr[X \leq 4 \ln(n)] &\leq e^{-(3/4)^2 16 \ln(n) / 2} \\ &\leq e^{-9 \ln(n) / 2} \\ &\leq n^{-4} \end{aligned}$$

3.4 Tutorial

1. We have k servers that are supposed to handle $n \gg k$ jobs. But the jobs come online and there is no single computer that knows the loads of servers (otherwise we would have a lot of communication). How do we distribute the jobs? We distribute the jobs each independently uniformly at random. How to bound the maximum load?

Solution:

- Let X_i be the load of the i -th server.
- We know that $X_i = \sum_{\ell=1}^n X_{i,\ell}$ where $X_{i,\ell}$ indicates if the ℓ -th job lands on the i -th server. And $X_{i,1}, X_{i,2}, \dots, X_{i,n}$ are independent for each i (that does not hold for X_i).
- $\Pr[X_{i,\ell}] = 1/k$
- $\mathbb{E}[X_i] = n/k$
- We use Chernoff bound:

$$\Pr[X \geq (1 + \delta)\mu] \leq e^{-\delta^2 \mu/3}$$

We set $\delta = 3\sqrt{k \ln(k)/n}$.

$$\begin{aligned} \Pr[X_i \geq n/k + 3\sqrt{n \ln(k)/k}] &= \Pr[X_i \geq (1 + 3\sqrt{k \ln(k)/n})n/k] \\ &\leq e^{-(3\sqrt{k \ln(k)/n})^2 n/3k} && \text{(Chernoff bound)} \\ &\leq e^{-3 \ln(k)} \\ &= k^{-3} \end{aligned}$$

- We use the union bound to bound the probability that there exists a server with that load:

$$\Pr[\text{exists } i \in [k]: X_i \geq n/k + 3\sqrt{n \ln(k)/k}] = k^{-2}$$

- To be concrete:

$$k = 1000$$

$$n = 1000000$$

$$n/k = 1000$$

$$\Pr[\text{exists a server with at least } n/k + 3\sqrt{n \ln(k)/k} \text{ jobs}] \leq k^{-2}$$

$$\Pr[\text{exists a server with at least 1250 jobs}] \leq 1/1000000$$

2. **Distributed discrete logarithm algorithm (Breaking the Circuit Size Barrier for Secure Computation Under DDH, Boyle, Gilboa, Ishai linked on the website).**

Solution: We say that a group \mathbb{G} is *cyclic* iff any of its element can be generated using a single generator. Say we have the group (\mathbb{Z}_5^*, \cdot) with its generator 3:

$$\mathbb{Z}_5^* = \{1, 2, 3, 4\}$$

$$3^0 = 1$$

$$3^1 = 3$$

$$3^2 = 4$$

$$3^3 = 2$$

When we fix a group \mathbb{G} and its generator g we may ask what is the discrete logarithm of a given group element:

$$DLog_{\mathbb{G},g}(x) = \min_{n \in \mathbb{N}} g^n = x$$

So for instance $DLog_{\mathbb{Z}_5^*,3}(4) = 2$.

3. Let A, B be two disjoint sets of vertices where $|A| = |B| = n$. Let $d \geq 5$ be a constant. We choose d uniformly at random edges from each vertex from A . We show that with constant positive probability each set $S \subseteq A$ of size $|S| \leq n/d$ has at least $\beta|S|$ neighbors where $\beta = d/4$.

Solution:

- For each $S \subseteq A$ and for each $T \subseteq B$ we denote $X_{S,T}$ the indicator variable that is equal to one iff all the neighbors of S are contained in T .
-

$$\Pr[X_{S,T} = 1] = \left(\frac{|T|}{n}\right)^{d|S|}$$

- We use the estimate that $\binom{n}{k} \leq \left(\frac{ne}{k}\right)^k$.
-

$$\begin{aligned} \Pr[\exists S \subseteq A, T \subseteq B: |S| \leq n/d, |T| \leq \beta|S|, X_{S,T}] &\leq \sum_{s=1}^{n/d} \binom{n}{s} \binom{n}{\beta s} \left(\frac{\beta s}{n}\right)^{ds} \\ &\leq \sum_{s=1}^{n/d} \binom{n}{\beta s}^2 \left(\frac{\beta s}{n}\right)^{ds} \\ &\hspace{15em} (\text{as } \binom{n}{s} \leq \binom{n}{\beta s}) \\ &\leq \sum_{s=1}^{n/d} \left(\frac{ne}{\beta s}\right)^{2\beta s} \left(\frac{\beta s}{n}\right)^{ds} \\ &= \sum_{s=1}^{n/d} \left(\frac{4ne}{ds}\right)^{ds/2} \left(\frac{ds}{4n}\right)^{ds} \\ &= \sum_{s=1}^{n/d} \left(\frac{eds}{4n}\right)^{ds/2} \\ &\leq \sum_{s=1}^{n/d} \left(\frac{e}{4}\right)^{ds/2} \hspace{5em} (\text{as } ds \leq n) \\ &\leq \frac{(e/4)^{d/2}}{1 - (e/4)^{d/2}} \hspace{2em} (\text{geometric series}) \\ &< 1 \end{aligned}$$

- What would happen if the graph was a union of d perfect matchings?

3.5 Tutorial

1. Let us define the *edge expansion* for a given graph G by:

$$h(G) = \min_{|S| \leq n/2} \frac{e(S, V \setminus S)}{|S|}$$

For any $S \subseteq V(G)$ we denote

$$\begin{aligned} e(S) &= E(G) \cap S \times S = \text{number of edges inside } S \\ e(S, V(G) \setminus S) &= E(G) \cap (S \times (V(G) \setminus S)) = \text{number of edges going from } S \text{ to the complement} \end{aligned}$$

Let us show that if λ_2 is the second largest eigenvalue of the adjacency matrix of a d -regular graph G then:

$$h(G) \geq \frac{d - \lambda_2}{2}$$

Solution:

- The idea is to use Courant-Fisher of Problem 3 from the second tutorial. If u_1 is the eigenvector corresponding to the first eigenvalue λ_1 , we have:

$$\lambda_2 = \max_{x \in \mathbb{R}^n, x^T u_1 = 0} \frac{x^T A x}{x^T x}$$

- Recall that $u_1 = (1, 1, 1, \dots, 1)^T$ and our vector x should be orthogonal to it so that we can use the Courant-Fisher ($\langle x | u_1 \rangle = 0$). Moreover it should correspond to our set S .
- Let $S \subseteq V(G)$ of size $s = |S| \leq n/2$. Let us define the vector

$$x_v = \begin{cases} n - s & v \in S \\ -s & v \notin S \end{cases}$$

- Let us determine the norm squared of x :

$$\begin{aligned} x^T x &= x^T x \\ &= (n - s)^2 s + s^2 (n - s) \\ &= s(n - s)n \end{aligned}$$

- Let us determine the nominator from Courant-Fischer for our vector x as defined above:

$$\begin{aligned} x^T A x &= 2 \sum_{(u,v) \in E(G)} x_u x_v \\ &= 2(n - s)^2 e(S) - 2s(n - s)e(S, V(G) \setminus S) + 2s^2 e(V(G) \setminus S) \end{aligned}$$

Note that:

$$\begin{aligned} ds &= 2e(S) + e(S, V(G) \setminus S) \\ d(n - s) &= 2e(V(G) \setminus S) + e(S, V(G) \setminus S) \end{aligned}$$

we plug that into the above:

$$\begin{aligned}
x^T Ax &= 2 \sum_{(u,v) \in E(G)} x_u x_v \\
&= 2(n-s)^2 e(S) - 2s(n-s) e(S, V(G) \setminus S) + 2s^2 e(V(G) \setminus S) \\
&= (n-s)^2 (ds - e(S, V(G) \setminus S)) - 2s(n-s) e(S, V(G) \setminus S) + s^2 (d(n-s) - e(S, V(G) \setminus S)) \\
&= e(S, V(G) \setminus S) (-(n-s)^2 - 2s(n-s) - s^2) + ds ((n-s)^2 + s(n-s)) \\
&= -n^2 e(S, V(G) \setminus S) + ds n(n-s)
\end{aligned}$$

and we plug our vector x into the Courant-Fisher:

$$\begin{aligned}
\lambda_2 &\geq \frac{x^T Ax}{x^T x} \\
&= \frac{-n^2 e(S, V(G) \setminus S) + ds n(n-s)}{s(n-s)n} \\
&= d - e(S, V(G) \setminus S) \frac{n}{s(n-s)}
\end{aligned}$$

Finally we use that $s \leq n/2$ and thus $\frac{n-s}{n} \geq 1/2$ and rearrange the former inequality:

$$\begin{aligned}
\frac{e(S, V(G) \setminus S)}{|S|} &\geq \frac{n-s}{n} (d - \lambda_2) \\
&\geq \frac{d - \lambda_2}{2}
\end{aligned}$$

2. Show that for any $v \in \mathbb{R}^n$ it holds that

$$\frac{1}{\sqrt{n}}\|v\|_1 \leq \|v\|_2 \leq \|v\|_1$$

Solution: We use the Cauchy-Schwarz inequality:

$$\langle u | v \rangle \leq \|u\|_2 \|v\|_2 \quad (\text{for any } u, v \text{ and norm } \|v\|_2 = \sqrt{\langle v | v \rangle})$$

The first inequality can be done by a clever choice of u :

$$\begin{aligned} u_i &= \begin{cases} 1 & \text{if } v_i \geq 0 \\ -1 & \text{if } v_i < 0 \end{cases} \\ \|v\|_2 &\geq \frac{\langle u | v \rangle}{\|u\|_2} \\ &= \frac{\sum_{i=1}^n |v_i|}{\sqrt{\sum_{i=1}^n u_i^2}} \\ &= \frac{\|v\|_1}{\sqrt{n}} \end{aligned}$$

The second inequality can be proven as follows:

$$\begin{aligned} \|v\|_1^2 &= \left(\sum_{i=1}^n |v_i| \right) \left(\sum_{i=1}^n |v_i| \right) \\ &= \left(\sum_{i=1}^n |v_i|^2 \right) + \left(\sum_{i=1}^n \sum_{j \neq i} |v_i| |v_j| \right) \\ &\geq \left(\sum_{i=1}^n |v_i|^2 \right) \\ &= \|v\|_2^2 \end{aligned}$$

Let us just note that inequalities with norms are very useful and there are many of those. One well known is for instance the Hölder inequality: https://en.wikipedia.org/wiki/H%C3%B6lder%27s_inequality

3. Let μ be a probability distribution, that is $\|\mu\|_1 = 1$ and $\mu_j \geq 0$ (for each $j \in \Omega$). Let us define $d(\mu, \nu)$ the distance of two probability distributions as:

$$d(\mu, \nu) = \frac{1}{2} \sum_{x \in \Omega} |\mu(x) - \nu(x)|$$

Show that:

$$d(\mu, \nu) = \max_{A \subseteq \Omega} \mu(A) - \nu(A)$$

where $\mu(A) = \sum_{x \in A} \mu(x)$.

Solution: Set the set $A = \{x \in \Omega \mid \mu(x) \geq \nu(x)\}$ and we get:

$$\begin{aligned} \frac{1}{2} \sum_{x \in \Omega} |\mu(x) - \nu(x)| &= \frac{1}{2} \left(\sum_{x \in A} |\mu(x) - \nu(x)| \right) + \frac{1}{2} \left(\sum_{x \in \Omega \setminus A} |\mu(x) - \nu(x)| \right) \\ &= \frac{1}{2} \left(\sum_{x \in A} \mu(x) - \nu(x) \right) + \frac{1}{2} \left(\sum_{x \in \Omega \setminus A} \nu(x) - \mu(x) \right) \\ &= \frac{1}{2} (\mu(A) - \nu(A)) + \frac{1}{2} (\nu(\Omega \setminus A) - \mu(\Omega \setminus A)) \\ &= \frac{1}{2} (\mu(A) - \nu(A)) + \frac{1}{2} ((1 - \nu(A)) - (1 - \mu(A))) \\ &= \mu(A) - \nu(A) \\ &\leq \max_{A \subseteq \Omega} \mu(A) - \nu(A) \end{aligned}$$

We are left to realize that our set A maximizes the right hand side.

4. Let M be a Markov chain on the set of states S . We say that a Markov chain $Z_t = (X_t, Y_t)$ on the set of states $S \times S$ is a coupling iff

$$\begin{aligned} \Pr[X_{t+1} = x' \mid Z_t = (x, y)] &= \Pr[M_{t+1} = x' \mid M_t = x] \\ &\quad \text{(where } X_{t+1} \text{ is the first coordinate of } Z_{t+1}) \\ \Pr[Y_{t+1} = y' \mid Z_t = (x, y)] &= \Pr[M_{t+1} = y' \mid M_t = y] \\ &\quad \text{(where } Y_{t+1} \text{ is the second coordinate of } Z_{t+1}) \end{aligned}$$

So one can imagine a coupling as a Markov chain, that in both coordinates behaves in the same way as the original Markov chain (but the coordinates might be dependent on each other).

Let $Z_t = (X_t, Y_t)$ be a coupling of a Markov chain M on the state space S . Suppose there is a T such that:

$$\Pr[X_T \neq Y_T \mid X_0 = x, Y_0 = y] \leq \varepsilon \quad (\text{for all } x, y \in S)$$

then

$$\tau(\varepsilon) \leq T$$

Where formally the mixing time $\tau(\varepsilon)$ is defined as

$$\begin{aligned} p_x^t &= \text{the distribution when starting at } x \text{ and doing } t \text{ steps} \\ \tau(\varepsilon) &= \max_{x \in S} \min \{t \mid d(p_x^t, \pi) \leq \varepsilon\} \end{aligned}$$

Notice that when we prove that $\Pr[X_T \neq Y_T \mid X_0 = x, Y_0 = y] \leq \varepsilon$ for all $x, y \in S$, we know that we are close to the stationary distribution (without even knowing the stationary distribution).

Solution: Pick any set of states $A \subseteq S$ and try to bound the probability that after T steps X_T is in A and let Y_0 be selected according to the stationary distribution π :

$$\begin{aligned} \Pr[X_T \in A] &\geq \Pr[X_T \in A \wedge X_T = Y_T] \\ &= \Pr[X_T = Y_T \wedge Y_T \in A] \\ &= 1 - \Pr[X_T \neq Y_T \vee Y_T \notin A] && \text{(probability of complement)} \\ &\geq 1 - \Pr[X_T \neq Y_T] - \Pr[Y_T \notin A] && \text{(union bound)} \\ &= (1 - \Pr[Y_T \notin A]) - \Pr[X_T \neq Y_T] \\ &\geq (1 - \Pr[Y_T \notin A]) - \varepsilon && \text{(assumption)} \\ &= \Pr[Y_T \in A] - \varepsilon && \text{(probability of complement)} \\ &= \pi(A) - \varepsilon \end{aligned}$$

So for any $A \subseteq S$ we have

$$\Pr[X_T \in A] \geq \pi(A) - \varepsilon$$

and the same argument for $S \setminus A$ gives us

$$\Pr[X_T \notin A] \geq \pi(S \setminus A) - \varepsilon$$

so

$$\begin{aligned} \Pr[X_T \notin A] &\geq \pi(S \setminus A) - \varepsilon \\ 1 - \Pr[X_T \in A] &\geq 1 - \pi(A) - \varepsilon \\ -\Pr[X_T \in A] &\geq -\pi(A) - \varepsilon \end{aligned}$$

$$\Pr[X_T \in A] \leq \pi(A) + \varepsilon$$

Thus together we have:

$$\pi(A) - \varepsilon \leq \Pr[X_T \in A] \leq \pi(A) + \varepsilon$$

so

$$\max_{x \in S} d(p_x^T, \pi) = \max_{x \in S, A \subseteq S} |p_x^T(A) - \pi(A)| \leq \varepsilon$$

5. We define the hypercube graph of dimension d as follows: the vertices are binary strings of length d and two vertices are connected by an edge iff they differ in exactly one coordinate. For instance $d = 2$ the graph is

$$(\{00, 01, 10, 11\}, \{(00, 01), (00, 10), (11, 01), (11, 10)\})$$

(the edges are not oriented).

We start at O^d and do the following random walk:

- With probability $1/2$ we stay at the current vertex.
- With probability $1/2$ we choose uniformly at random and index $j \in [d]$ and change the corresponding bit.

The Markov chain is nice (it converges to a single stationary distribution, namely the uniform distribution on all vertices). Our question is how many steps do we need to take until we are “close enough” to the uniform distribution. Show that the random walk has $\tau(\varepsilon) \leq d \ln(d/\varepsilon)$.

Solution: We do coupling (X_t, Y_t) where

- $X_0 = O^d$
- Y_0 is chosen according to the uniform distribution (that is the stationary distribution)
- $Z_t = (X_t, Y_t)$ where the moves are as follows, let $X_t = x \in \{0, 1\}^d$ and $Y_t = y \in \{0, 1\}^d$ (that is $Z_t = (x, y)$):
 - Pick uniformly at random a coordinate $i \in [d]$ (the same for both)
 - If $x_i = y_i$ then with probability $1/2$ we keep the i -th bit the same $Z_{t+1} = (X_{t+1}, Y_{t+1}) = (x, y)$ and with probability $1/2$ we change it $Z_{t+1} = (x \oplus e_i, y \oplus e_i)$.
 - If $x_i \neq y_i$ then with probability $1/2$ we keep the i -th bit of x the same and change the i -th bit of y $Z_{t+1} = (X_{t+1}, Y_{t+1}) = (x, y \oplus e_i)$ and with probability $1/2$ we change the i -th bit of x and keep the i -th bit of y $Z_{t+1} = (x \oplus e_i, y)$.

Thus after picking the coordinate j we know for sure that $(X_t)_j = (Y_t)_j$ and it stays the same (the j -th bit is the same from that point on). Thus we have coupon collector problem. Probability of not picking all coordinates after $d \ln(d/\varepsilon)$ can be bounded by:

$$\begin{aligned} \Pr[\text{there is a coordinate that has not been picked}] &\leq d \cdot \Pr[\text{coordinate } d \text{ has not been picked}] \\ &\hspace{15em} (\text{union bound}) \\ &\leq d(1 - 1/d)^{d \ln(d/\varepsilon)} \\ &\leq de^{-\ln(d/\varepsilon)} \hspace{10em} (1 - x \leq e^{-x}) \\ &\leq \varepsilon \end{aligned}$$

3.6 Tutorial

1. **Definition:** a random variable – our estimate $A > 0$ is an $\varepsilon - \delta$ approximation of a value $g > 0$ if

$$\Pr[(1 - \varepsilon)g \leq A \leq (1 + \varepsilon)g] \geq 1 - \delta$$

Prove the *Estimator Theorem*: Let U be a finite set and $G \subseteq U$ its subset. We know $|U|$ and wish to estimate $|G|$. If we take n uniformly random and independent samples from U where

$$n \geq \frac{3}{\varepsilon^2 \frac{|G|}{|U|}} \ln(2/\delta)$$

$X =$ number of samples inside of G

and output $A = X \frac{|U|}{n}$ then A is $\varepsilon - \delta$ approximation of $|G|$.

Solution: We will use a Chernoff bound.

- Observe that $\mathbb{E}[X/n] = |G|/|U|$ as

$$\begin{aligned} X &= \sum_{j=1}^n X_j && (X_j \text{ is the indicator if } j\text{-th sample was in } G) \\ \Pr[X_j] &= \frac{|G|}{|U|} \\ \mathbb{E}[X_j] &= \frac{|G|}{|U|} \\ \mathbb{E}[X] &= n \frac{|G|}{|U|} && (\text{linearity of } \mathbb{E}) \\ \mathbb{E}[A] &= |G| \end{aligned}$$

- All of X_j are independent and $0 \leq X_j \leq 1$.
- We may use Chernoff bounds, we use the following form:

$$\begin{aligned} \Pr[X \geq (1 + \delta)\mu] &\leq e^{-\delta^2 \mu / 3} \\ \Pr[X \leq (1 - \delta)\mu] &\leq e^{-\delta^2 \mu / 2} \leq e^{-\delta^2 \mu / 3} \\ \Pr[X \geq (1 + \delta)\mu \text{ or } X \leq (1 - \delta)\mu] &\leq 2e^{-\delta^2 \mu / 3} \end{aligned}$$

- Plugging all of the above:

$$\begin{aligned} \Pr \left[X \geq (1 + \varepsilon)n \frac{|G|}{|U|} \text{ or } X \leq (1 - \varepsilon)n \frac{|G|}{|U|} \right] &\leq 2e^{-\varepsilon^2 n \frac{|G|}{3|U|}} \\ &\leq 2e^{-\varepsilon^2 \left(\frac{3}{\varepsilon^2 \frac{|G|}{|U|}} \ln(2/\delta) \right) \frac{|G|}{3|U|}} \\ &\leq 2e^{-(3 \ln(2/\delta))/3} \\ &= \delta \end{aligned}$$

2. We say that \hat{x} is an ε -approximation of x iff

$$(1 - \varepsilon)x \leq \hat{x} \leq (1 + \varepsilon)x$$

Show that for $\varepsilon < 1/2$ if we have ε -approximation \hat{s} of a number s and ε -approximation \hat{t} of a number t then \hat{s}/\hat{t} is an 4ε -approximation of s/t .

Solution: We have

$$(1 - \varepsilon)s \leq \hat{s} \leq (1 + \varepsilon)s$$

thus

$$\frac{\hat{s}}{\hat{t}} \leq \frac{(1 + \varepsilon)s}{(1 - \varepsilon)t}$$

and we need the following inequality to hold

$$\begin{aligned} \frac{1 + \varepsilon}{1 - \varepsilon} &\leq 1 + 4\varepsilon \\ 1 + \varepsilon &\leq (1 + 4\varepsilon)(1 - \varepsilon) && (1 - \varepsilon > 0) \\ 1 + \varepsilon &\leq 1 + 3\varepsilon - 4\varepsilon^2 \\ 0 &\leq 2\varepsilon - 4\varepsilon^2 \end{aligned}$$

which holds for any $\varepsilon \in (0, 1/2)$.

The other inequality follows the same way:

$$\begin{aligned} \frac{1 - \varepsilon}{1 + \varepsilon} &\geq 1 - 4\varepsilon \\ 1 - \varepsilon &\geq (1 - 4\varepsilon)(1 + \varepsilon) && (1 + \varepsilon > 0) \\ 1 - \varepsilon &\geq 1 - 3\varepsilon - 4\varepsilon^2 \\ 0 &\geq -2\varepsilon - 4\varepsilon^2 \end{aligned}$$

which holds for any $\varepsilon \in (0, 1/2)$.

3. Let $\varepsilon > 0$ be fixed. Find a suitable choice of $\bar{\varepsilon}$ such that if we take $(\hat{a}_i)_{i=1}^n$ of numbers $(a_i)_{i=1}^n$ then $\prod_{i=1}^n \hat{a}_i$ is an ε -approximation of $\prod_{i=1}^n a_i$.

Solution: We know that

$$\begin{aligned} \prod_{i=1}^n \hat{a}_i &\leq \prod_{i=1}^n (1 + \bar{\varepsilon})a_i \\ &\leq \left(\prod_{i=1}^n (1 + \bar{\varepsilon}) \right) \left(\prod_{i=1}^n a_i \right) \\ &\leq (1 + \varepsilon) \left(\prod_{i=1}^n a_i \right) \end{aligned}$$

Thus we want

$$\begin{aligned} (1 + \bar{\varepsilon})^n &\leq 1 + \varepsilon \\ 1 + \bar{\varepsilon} &\leq \sqrt[n]{1 + \varepsilon} \\ \bar{\varepsilon} &\leq \sqrt[n]{1 + \varepsilon} - 1 \end{aligned}$$

The same way we want

$$\begin{aligned} (1 - \bar{\varepsilon})^n &\geq 1 - \varepsilon \\ 1 - \bar{\varepsilon} &\geq \sqrt[n]{1 - \varepsilon} \\ -1 + \bar{\varepsilon} &\leq -\sqrt[n]{1 - \varepsilon} \\ \bar{\varepsilon} &\leq 1 - \sqrt[n]{1 - \varepsilon} \end{aligned}$$

More useful solution (added): We use the following inequalities:

$$\begin{aligned} 1 + x &\leq e^x \\ \ln(1 + x) &\leq x \\ 1 - x &\leq e^{-x} \\ 1 - x &\geq e^{-2x} \end{aligned} \quad (0 \leq x \leq 1/2)$$

If we set $\bar{\varepsilon} = \varepsilon/2n$ we get:

$$\begin{aligned} (1 - \bar{\varepsilon})^n &\geq e^{-2\bar{\varepsilon}n} && \text{(if } \bar{\varepsilon} \leq 1/2) \\ &= e^{-\varepsilon} \\ &\geq 1 - \varepsilon \end{aligned}$$

If we set $\bar{\varepsilon} = \varepsilon/2n \geq \varepsilon/n \geq \ln(1 + \varepsilon)/n$ we get:

$$\begin{aligned} (1 + \bar{\varepsilon})^n &\leq e^{\bar{\varepsilon}n} \\ &= e^{\ln(1 + \varepsilon)} \\ &= 1 + \varepsilon \end{aligned}$$

4. Show an algorithm that given a bipartite graph G (partites consisting of the same number of vertices) determines if the number of perfect matchings is even or odd.

Solution: Let us recall the definitions:

$$\det(A) = \sum_{\pi \in S_n} \operatorname{sgn}(\pi) \prod_{i=1}^n A_{i,\pi(i)}$$
$$\operatorname{perm}(A) = \sum_{\pi \in S_n} \prod_{i=1}^n A_{i,\pi(i)}$$

If A is the part of the adjacency matrix of G corresponding to the different partites (thus rows of A correspond to one partite and columns to the other and $A_{u,v} = 1$ iff u belongs to one partite, v to the other one and are connected together by an edge) and a permutation π determines a perfect matching (that is $(j, \pi(j)) \in E(G)$) then the product is equal to one (and to zero otherwise). Thus $\operatorname{perm}(A)$ is the number of perfect matchings. But remember that over \mathbb{Z}_2 we have $1 = -1$, thus specially $\det(A) = \operatorname{perm}(A)$ over \mathbb{Z}_2 .

We know how to compute determinant in polynomial time. Permanent is thought to be hard to compute, but its parity is easy.

5. Let $A \in \{0, 1\}^{n \times n}$ be a matrix. Let $\varepsilon_{i,j}$ be independent random ± 1 variables. Let $B \in \{-1, 0, 1\}^{n \times n}$ be a matrix such that $B_{i,j} = \varepsilon_{i,j} A_{i,j}$ (uniformly randomly independently assign signs to entries of A).

(a) Show that $\mathbb{E}[\det(B)] = 0$

Solution: Let us remind that

$$\det(A) = \sum_{\pi \in S_n} \operatorname{sgn}(\pi) \prod_{i=1}^n A_{i,\pi(i)}$$

$$\operatorname{perm}(A) = \sum_{\pi \in S_n} \prod_{i=1}^n A_{i,\pi(i)}$$

We use linearity of expectation (it holds even when the variables are dependent):

$$\begin{aligned} \mathbb{E}[\det(B)] &= \mathbb{E} \left[\sum_{\pi \in S_n} \operatorname{sgn}(\pi) \prod_{i=1}^n B_{i,\pi(i)} \right] \\ &= \sum_{\pi \in S_n} \operatorname{sgn}(\pi) \mathbb{E} \left[\prod_{i=1}^n B_{i,\pi(i)} \right] \\ &= \sum_{\pi \in S_n} \operatorname{sgn}(\pi) \mathbb{E} \left[\prod_{i=1}^n \varepsilon_{i,\pi(i)} A_{i,\pi(i)} \right] \\ &= \sum_{\pi \in S_n} \operatorname{sgn}(\pi) 0 \end{aligned}$$

Here we could have used that for *independent* variables we have $\mathbb{E}[XY] = \mathbb{E}[X]\mathbb{E}[Y]$, but I believe the above is clear enough.

We could have probably used the Laplace expansion

$$\det(A) = \sum_{j=1}^n (-1)^{i+j} A_{i,j} M_{i,j} \quad (\text{for any } i)$$

$M_{i,j}$ = determinant of the matrix A without i -th row and without j -th column

$$\operatorname{perm}(A) = \sum_{j=1}^n A_{i,j} N_{i,j} \quad (\text{for any } i)$$

$N_{i,j}$ = permanent of the matrix A without i -th row and without j -th column

(b) Show that $\mathbb{E}[\det(B)^2] = \operatorname{perm}(A)$ (**permanent of A**)

Solution: We could investigate two directions

$$\det(B)^2 = \det(B^2)$$

let us go with the first one:

$$\begin{aligned} \mathbb{E}[\det(B)^2] &= \mathbb{E} \left[\left(\sum_{\pi \in S_n} \operatorname{sgn}(\pi) \prod_{i=1}^n B_{i,\pi(i)} \right) \left(\sum_{\sigma \in S_n} \operatorname{sgn}(\sigma) \prod_{i=1}^n B_{i,\sigma(i)} \right) \right] \\ &= \mathbb{E} \left[\sum_{(\pi,\sigma) \in S_n \times S_n} \operatorname{sgn}(\pi) \operatorname{sgn}(\sigma) \prod_{i=1}^n B_{i,\pi(i)} B_{i,\sigma(i)} \right] \end{aligned}$$

$$\begin{aligned}
&= \mathbb{E} \left[\sum_{\pi \neq \sigma \in S_n} \operatorname{sgn}(\pi) \operatorname{sgn}(\sigma) \prod_{i=1}^n B_{i,\pi(i)} B_{i,\sigma(i)} \right] + \mathbb{E} \left[\sum_{\pi \in S_n} \prod_{i=1}^n B_{i,\pi(i)}^2 \right] \\
&= \sum_{\pi \neq \sigma \in S_n} \operatorname{sgn}(\pi) \operatorname{sgn}(\sigma) \mathbb{E} \left[\prod_{i=1}^n B_{i,\pi(i)} B_{i,\sigma(i)} \right] + \mathbb{E} \left[\sum_{\pi \in S_n} \prod_{i=1}^n A_{i,\pi(i)}^2 \right] \\
&= \sum_{\pi \neq \sigma \in S_n} \operatorname{sgn}(\pi) \operatorname{sgn}(\sigma) \mathbb{E} \left[\prod_{i=1}^n \varepsilon_{i,\pi(i)} \varepsilon_{i,\sigma(i)} A_{i,\pi(i)} A_{i,\sigma(i)} \right] + \operatorname{perm}(A) \\
&= \sum_{\pi \neq \sigma \in S_n} \operatorname{sgn}(\pi) \operatorname{sgn}(\sigma) 0 + \operatorname{perm}(A) \\
&= \operatorname{perm}(A)
\end{aligned}$$

But it is not very concentrated.

6. **Let $G = (U \cup V, E)$ be a bipartite graph such that $|U| = |V| = n$ and $\delta(G) > n/2$ (the least degree). Show that for any matching of size at most $n - 1$ there is an augmenting path of length at most 3.**

Solution:

- Consider a vertex $u \in U$ and a vertex $v \in V$ that have no matching.
- Without loss of generality u, v is not an edge (otherwise we have an augmenting path of length 1).
- Consider all neighbours of u , that is $N(u)$, again all of those have a matching otherwise we are done.
- We know that $|N(v)| > n/2$ and all of $N(u)$ have a matched vertex and also $|N(u)| > n/2$.
- Thus there is a vertex $w \in m(N(v)) \cap N(u)$ (where $m(x)$ is the vertex matched with the vertex x).
- $u, w, m(w), v$ is an augmenting path of length at most three.

7. Let $G = (U \cup V, E)$ be a bipartite graph such that $|U| = |V| = n$ and $\delta(G) > n/2$ (the least degree). Show that for any $2 \leq k \leq n$ and a matching m of size k there are at most n^2 matchings m' of size $k-1$ such that we can get from m' to m using an augmenting path of length at most 3.

Solution: There are at most n^2 edges. We can associate each augmenting path with its middle edge (and an augmenting path uniquely determines both m and m').

3.7 Tutorial

1. Let $\varepsilon > 0$ be fixed. Find a suitable choice of $\bar{\varepsilon}$ such that if we take $(\hat{a}_i)_{i=1}^n$ of numbers $(a_i)_{i=1}^n$ then $\prod_{i=1}^n \hat{a}_i$ is an ε -approximation of $\prod_{i=1}^n a_i$.

Solution: We know that

$$\begin{aligned} \prod_{i=1}^n \hat{a}_i &\leq \prod_{i=1}^n (1 + \bar{\varepsilon})a_i \\ &\leq \left(\prod_{i=1}^n (1 + \bar{\varepsilon}) \right) \left(\prod_{i=1}^n a_i \right) \\ &\leq (1 + \varepsilon) \left(\prod_{i=1}^n a_i \right) \end{aligned}$$

Thus we want

$$\begin{aligned} (1 + \bar{\varepsilon})^n &\leq 1 + \varepsilon \\ 1 + \bar{\varepsilon} &\leq \sqrt[n]{1 + \varepsilon} \\ \bar{\varepsilon} &\leq \sqrt[n]{1 + \varepsilon} - 1 \end{aligned}$$

The same way we want

$$\begin{aligned} (1 - \bar{\varepsilon})^n &\geq 1 - \varepsilon \\ 1 - \bar{\varepsilon} &\geq \sqrt[n]{1 - \varepsilon} \\ -1 + \bar{\varepsilon} &\leq -\sqrt[n]{1 - \varepsilon} \\ \bar{\varepsilon} &\leq 1 - \sqrt[n]{1 - \varepsilon} \end{aligned}$$

More useful solution (added): We use the following inequalities:

$$\begin{aligned} 1 + x &\leq e^x \\ \ln(1 + x) &\leq x \\ 1 - x &\leq e^{-x} \\ 1 - x &\geq e^{-2x} \end{aligned} \quad (0 \leq x \leq 1/2)$$

If we set $\bar{\varepsilon} = \varepsilon/2n$ we get:

$$\begin{aligned} (1 - \bar{\varepsilon})^n &\geq e^{-2\bar{\varepsilon}n} && (\text{if } \bar{\varepsilon} \leq 1/2) \\ &= e^{-\varepsilon} \\ &\geq 1 - \varepsilon \end{aligned}$$

If we set $\bar{\varepsilon} = \varepsilon/2n \geq \varepsilon/n \geq \ln(1 + \varepsilon)/n$ we get:

$$\begin{aligned} (1 + \bar{\varepsilon})^n &\leq e^{\bar{\varepsilon}n} \\ &= e^{\ln(1 + \varepsilon)} \\ &= 1 + \varepsilon \end{aligned}$$

2. Let $G = (U \cup V, E)$ be a bipartite graph where $|U| = |V| = n$ and $\delta(G) > n/2$. Let r_k be the fraction of k -matchings to $k-1$ -matchings in G . Let $\alpha \geq 1$ be a real number such that $1/\alpha \leq r_k \leq \alpha$. Pick $N = n^7 \alpha$ elements from $M_k \cup M_{k-1}$ independently uniformly at random. Set \hat{r}_k to the fraction of observed k -matchings to $k-1$ -matchings. Show that $(1 - 1/n^3) r_k \leq \hat{r}_k \leq (1 + 1/n^3) r_k$ with probability at least $1 - c^{-n}$ for some constant c .

Solution: We use Estimator Theorem from problem 1 of tutorial 6, restated for our convenience:

Prove the *Estimator Theorem*: Let U be a finite set and $G \subseteq U$ its subset. We know $|U|$ and wish to estimate $|G|$. If we take n uniformly random and independent samples from U where

$$n \geq \frac{3}{\varepsilon^2 \frac{|G|}{|U|}} \ln(2/\delta)$$

$X =$ number of samples inside of G

and output $A = X \frac{|U|}{n}$ then A is $\varepsilon - \delta$ approximation of $|G|$:

$$\Pr[(1 - \varepsilon)g \leq A \leq (1 + \varepsilon)g] \geq 1 - \delta$$

For our use:

- We know just bounds on $r_k = \frac{|G|}{|U|}$ and we do not know $|U|$ itself. But luckily we wish to estimate r_k and not m_k or m_{k-1} .
- We will estimate $X = \frac{m_k}{m_k + m_{k-1}}$ and $Y = \frac{m_{k-1}}{m_k + m_{k-1}}$ and answer X/Y .
- $\varepsilon = 1/n^3$
-

$$\begin{aligned} \frac{|U|}{|G|} &= \frac{m_k + m_{k-1}}{m_k} \\ &= 1 + \frac{1}{r_k} \\ &\leq 1 + \alpha \end{aligned}$$

and

$$\begin{aligned} \frac{|U|}{|G|} &= \frac{m_k + m_{k-1}}{m_k} \\ &= 1 + \frac{1}{r_k} \\ &\geq 1 + \frac{1}{\alpha} \end{aligned}$$

thus

$$\begin{aligned} 1 + \frac{1}{\alpha} &\leq \frac{|U|}{|G|} \leq 1 + \alpha \\ \frac{1}{\alpha} &\leq 1 + \frac{1}{\alpha} \leq \frac{|U|}{|G|} \leq 1 + \alpha \leq 2\alpha \end{aligned}$$

- Our choice of N is $N = \alpha n^7$, thus

$$\frac{3|U|}{\varepsilon^2} \ln(2/\delta) \leq \frac{2\alpha}{n^{-6}} \ln(2/\delta)$$

$$\delta = \frac{e^{-2n}}{2} \quad (\text{our choice of } \delta)$$
$$N = \alpha n^7 \geq \frac{2\alpha}{n^{-6}} \ln(2/\delta)$$

- So our estimate X is quite precise. Similarly our estimate $Y = 1 - X$ is also quite precise. Thus even X/Y is quite precise estimate.

3. Let $G = (U \cup V, E)$ be a bipartite graph where $|U| = |V| = n$ and $\delta(G) > n/2$. Show that $1/n^2 \leq r_k \leq n^2$.

Solution: Let us recall that $r_k = \frac{m_k}{m_{k-1}}$.

- $r_k \leq n^2$ as there are at most n^2 edges and each $k-1$ -matching can be extended by a single edge to a k -matching (this is the case where each $k-1$ -matching can be extended to a larger one and all larger are different).
- The other inequality follows from last tutorial (recall alternating paths of length at most three argument).

4. Let G_k be the graph constructed from $G = (U \cup V, E)$ such that we add $n - k$ vertices to each partite and connect each new vertex with all old vertices in the opposite partite. Show that if R is the fraction of perfect matchings to the number of almost perfect matchings (all but one vertex in each partite is matched) in the new graph G_k then

$$R = \frac{m_k}{m_{k+1} + 2(n-k)m_k + (n-k+1)^2 m_{k-1}}$$

Solution: Draw an image.

- How many perfect matchings are there in G_k ?

$$m_k(n-k)!(n-k)!$$

- Can we extend M_{k+2} or larger to get an almost perfect matching in G_k ? No.
- Can we extend M_{k-2} or smaller to get an almost perfect matching in G_k ? No.
- In how many ways can we extend M_{k+1} to get an almost perfect matching in G_k ?

$$(n-k)(n-k-1)!(n-k)(n-k-1)!$$

- In how many ways can we extend M_k to get an almost perfect matching in G_k ?

$$2(n-k)(n-k)!(n-k)!$$

- In how many ways can we extend M_{k-1} to get an almost perfect matching in G_k ?

$$(n-k+1)^2(n-k)!(n-k)!$$

5. Show that permanent is in IP.

We say that a language $L \subseteq \{0,1\}^*$ is in IP if

- The verifier V gets a word $w \in \{0,1\}^*$, works in polynomial time in $|w|$ and can use random bits.
- The verifier V can communicate with the prover P (which is unbounded).
- We say that $L \in IP$ if there is a prover P and a verifier V such that:
 - Completeness: for each $w \in L$ we have

$$\Pr[V(w) \text{ accepts the proof of } P] \geq 2/3$$

- Soundness: for any $x \notin L$ and any prover Q we have

$$\Pr[V(x) \text{ accepts the proof of } Q] \leq 1/3$$

Show that the decision problem whether $\text{perm}(A) = k$ for a given matrix $A \in \{0,1\}^{n \times n}$ and $k \in \mathbb{N}$ is in IP.

Our plan: Denote $M^{1,i}$ the matrix M without the first row and i -th column. Denote $D(x)$ the matrix $(n-1) \times (n-1)$ where elements are polynomials of degree n such that $\forall i \in [n]: D(i) = A^{1,i}$. Then permanent of $D(x)$ is a polynomial of degree $n(n-1)$ in variable x .

Notice that:

- We can construct $D(x)$ using interpolation.
- $\text{perm}(M) = \sum_{i=1}^n \text{perm}(M^{1,i})$
- $\text{perm}(M) \leq n! \leq 2^{n^2}$

The protocol:

- If $n \leq 2$ check the answer.
- Let the prover generate a prime p such that $2^{n^2} < p < 2^{2n^2}$ and check that it is really a prime.
- Request polynomial $g \in \mathbb{Z}_p[x]$ of degree at most n^2 such that $g(x) = \text{perm}(D(x))$. Check $k = \sum_{i=1}^n M^{1,i} \text{perm}(D(i))$.
- Pick $a \in \mathbb{Z}_p$ uniformly at random and recursively check that $\text{perm}(D(a)) = g(a)$.

Observe that if $g(x) \neq \text{perm}(D(x))$ then $\Pr_{a \in \mathbb{Z}_p} [g(a) = \text{perm}(D(a))] \leq n^2/p$.

3.8 Tutorial

1. There are 52 cards. Let us determine how long does it take to shuffle a deck of cards using the following procedure: M_{t+1} pick a random card and put it on top.

- Determine a suitable coupling.

Solution: (X_t, Y_t) where X_0 is any shuffling of the deck and Y_0 is any shuffling of the deck (possibly different than X_0). We pick a random card (value and color) and put it on top of both X_t and Y_t . Thus both X_t and Y_t behave according to the original Markov chain.

- Determine after T steps probability of not converging.

Solution: After we have selected each card both decks have the same permutation. This is just coupon collector problem. After T steps probability of not selecting each card is:

$$\begin{aligned} \Pr[\text{not selecting a card}] &\leq 52 \Pr[\text{not selecting a particular card}] \\ &= 52(1 - 1/52)^T \\ &\leq 52e^{-T/52} \qquad \qquad \qquad (\text{as } 1 - x \leq e^{-x}) \end{aligned}$$

So roughly $\lceil 52 \ln(52/\delta) \rceil$ rounds is sufficient.

2.

- Let us consider the game of Tick-Tack-Toe on 3×3 grid. Think of an algorithm that plays this game.
- Consider a special case of such a tree: a full binary tree of depth $2k$ where there are boolean variables $x_1, x_2, \dots, x_{2^{2k}}$ in leaves and odd level vertices compute AND and even level vertices compute OR.
 - Show that for any deterministic evaluation algorithm there is an assignment such that our deterministic evaluation needs to query all input variables.
 - Show that using short circuiting (if one of inputs of AND is false return false without querying the other, similarly for OR if one input is true return true immediately) we can create an algorithm with better expected running time.

Solution: If we wish to evaluate an AND node recursively evaluate a random child and if it evaluates to false return false (without evaluating the other child) otherwise also recursively evaluate the other child. If we wish to evaluate an OR node recursively evaluate a random child and if it evaluates to true return true (without evaluating the other child) otherwise also recursively evaluate the other child.

By induction on k we show that it takes 3^k variable queries (which is much smaller than 2^{2k}).

3. We will work in a streaming model. That means we are getting data $d_j \in U$ online (we get d_1 , then d_2, \dots, d_n , but we do not know n in advance) and we can use only a very limited amount of memory (say $\mathcal{O}(\log(|U|))$ or $\text{poly}(|U|)$). Say $U = [N] = \{0, 1, 2, \dots, N - 1\}$. Create an algorithm to compute each of the following functions and state how many bits of memory you need (each d_j is represented using $\log(N)$ bits):

- $\max_{j \in [n]} d_j$

Solution: Just compute running maxima.

$$s_k = \max_{j \in [k]} d_j$$

$$s_{k+1} = \max(s_k, d_j)$$

The variables s_k do not need to be different, we can have just a single variable and update it. We use $\log(N)$ bits of memory.

- $\sum_{j \in [n]} d_j$

Solution: We compute partial sums (again by updating a single variable). We need $\log(nN) = \log(n) + \log(N)$ bits to represent the sum.

- The average $\left(\sum_{j \in [n]} d_j\right) / n$ (preferably without knowing n).

Solution: We could compute the sum and divide, but it might be handy to compute it the following way keep track of a_k (single updated variable) and k the number of elements seen so far:

$$a_1 = d_1$$

$$a_{k+1} = \frac{ka_k + d_{k+1}}{k+1}$$

$$= a_k + \frac{d_{k+1} - a_k}{k+1}$$

The latter is a bit better way (essentially the same expression, but no need to multiply and behaves better to the numbers). From the book The Art of Computer Programming (Knuth):

```
mean = 0.0
k = 0
```

```
for x in data:
    k += 1
    mean += (x - mean) / k
```

This is used in the GNU Scientific Library <https://savannah.gnu.org/git/?group=gsl> since 1998 (commit c91e4ff0dd04766f45cc899467b46a83ad06bd5d) until now (last check April 2021).

We need a single counter $\log(n)$ and bits for the floating point result.

4. **Again one-pass streaming model. Do one pass along the data $d_1, d_2, \dots, d_n \in U$ to find the most frequently occurring element given that it occurs $> n/2$ times. Use as little memory as possible.**

Solution: Classical interview question, https://en.wikipedia.org/wiki/Boyer%E2%80%9393Moore_majority_vote_algorithm Totally we have used $\log(|U|) + \log(n)$ bits of memory.

3.9 Tutorial

1. A *boolean circuit* https://en.wikipedia.org/wiki/Boolean_circuit
 - We say that a circuit is randomized if it also receives $m(n)$ independent random bits as inputs.
 - We say that a family of boolean circuits $(C_n)_{n \in \mathbb{N}}$ computes a function $f: \{0, 1\}^* \rightarrow \{0, 1\}$ if $\forall n \in \mathbb{N} \forall x \in \{0, 1\}^n : C_n(x) = f(x)$.
 - We say that a family of randomized circuits computes a function if $f(x) = 0$ then the circuit outputs zero no matter the random bits, if $f(x) = 1$ then the circuit outputs one with probability at least $1/2$ (over its random bits).

Show Adleman's theorem: if a boolean function has a randomized polynomial-sized boolean family, then it has a polynomial-sized boolean family.

Solution:

- The main idea is to fix enough random bits so that the answer is always correct.
- Fix length n , given $C_{n,m}$ (taking n bits of input and m random bits) we build C_n which is deterministic.
- Consider just the inputs where $f(x) = 1$ (on other inputs the circuit answers zero no matter the random bits).
- There are at most 2^n inputs of length n where $f(x) = 1$.
- By averaging there is a random string $r \in \{0, 1\}^m$ such that $C(x, r) = 1$ for at least half of the inputs where $f(x) = 1$. Let us denote this r by r_1 .
- Consider just the rest of strings where $f(x) = 1$ but $C(x, r_1) = 0$.
- By the assumptions $\forall x \in \{0, 1\}^n : \Pr_{r \leftarrow \{0, 1\}^m} [C(x, r) = 1] \geq 1/2$.
- Again by averaging there is a string r_2 such that for at least half of the left inputs $C(x, r_2) = 1$.
- Using at most n such inputs we can construct the circuit as $C_n(x) = \bigvee_{j=1}^n C(x, r_j)$ (using nm fixed bits hardcoded inside C_n).

2. Given an array $a \in \mathbb{N}^n$ which is sorted (that is $a[i] \leq a[i+1]$ for any $0 \leq i \leq n-2$) and a number $k \in \mathbb{N}$ determine whether there is index $0 \leq i \leq n-1$: $a[i] = k$.

(a) Show a fast algorithm.

Solution: Binary search. https://en.wikipedia.org/wiki/Binary_search_algorithm

(b) Recall Yao's Minmax Principle.

Solution: Let us suppose we have a finite set of inputs \mathcal{I} and a finite set of deterministic algorithms \mathcal{A} (we can view a randomized Las Vegas algorithm as a distribution over deterministic algorithms).

For all distributions p over the set of inputs \mathcal{I} , for all distributions q over the set of deterministic algorithms \mathcal{A} the following inequality holds:

$$\min_{A \in \mathcal{A}} \mathbb{E}[C(I_p, A)] \leq \max_{I \in \mathcal{I}} \mathbb{E}[C(I, A_q)]$$

Where $C(I, A)$ is the cost of algorithm A running on the input I (with input or algorithm chosen from a distribution $C(I_p, A)$ or $C(I, A_q)$ becomes a random variable).

(c) Show a lower bound for the expected number of steps of a randomized algorithm for search in sorted array.

Solution: When we suppose that an algorithm does not ask for the value at an index twice, then the worst case complexity is n array queries and we may use Yao's Minmax Principle. For a given length there are finitely many algorithms.

Fix length n .

- i. Can we use the input distribution $0^j 12^{n-j-1}$ (uniform over those strings)?

No! What would we ask for the key k ? Deterministic algorithm would have constant number of queries (single query if $k = 0$ or $k = 2$ and zero queries if $k = 1$).

- ii. We use uniform distribution over inputs (and ask for $k = 1$):

$$\mathcal{I} = \{0^j 12^{n-j-1} \mid 0 \leq j \leq n\} \cup \{0^j 2^{n-j} \mid 0 \leq j \leq n\}$$

- iii. We need to show that any deterministic algorithm has expected number of questions at least $\log_2(n)$ on the previous distribution.

(d) Can we do better if we assume something about the distribution of the numbers inside the array?

Solution: Yes, there is interpolation sort https://en.wikipedia.org/wiki/Interpolation_search which more closely follows searching in a dictionary than a binary sort. When searching in a dictionary we can interpolate where we are expecting the element to be (if it should start with the letter b it should be roughly in the second twentysixth of entries). It can be shown that the expected number of steps (over the inputs being uniformly independently sampled from a linearly ordered universe) is $\mathcal{O}(\log \log(n))$. But the worst case is $\Omega(n)$.

3. You will use hashing functions in the next lecture. Let us mention few definitions.

- The intuition is that we do not consider a single hash function but rather a set of functions and choose uniformly at random one hash function.
- We cannot store a random function (too much Shannon entropy, so technically we can but it is never practical) and sampling random function is also not practical.
- Thus we often choose functions that are very simple to store, evaluate, and sample from.

Let $[m] = \{0, 1, 2, \dots, m-1\}$.

- A system \mathcal{H} of functions from U to $[m]$ is called *c-universal* for a constant $c \geq 1$ if for each two different $x \neq y \in U$ we have

$$\Pr_{h \leftarrow \mathcal{H}} [h(x) = h(y)] = c/m$$

(When \mathcal{H} is the set of all functions then it is 1 universal.)

Let p be a prime and \mathbb{Z}_p be a field. Let \mathcal{D} be the system of functions from \mathbb{Z}_p^d to \mathbb{Z}_p :

$$\mathcal{D} = \{h_t(x) = \langle t | x \rangle \mid t \in \mathbb{Z}_p^d\}$$

Show that \mathcal{D} is 1-universal.

Solution: Fix $x \neq y \in \mathbb{Z}_p^d$ and focus on the coordinate where they differ.

But also observe that for each $h \in \mathcal{D}$ we have $h(0^d) = 0$ which is not always desirable.

- A system \mathcal{H} of functions from U to $[m]$ is called *strongly c-universal* (also called *2-independent*) for a constant $c \geq 1$ if for each two different $x \neq y \in U$ and each two slots $a, b \in [m]$ we have

$$\Pr_{h \leftarrow \mathcal{H}} [h(x) = a \wedge h(y) = b] = c/m^2$$

- Why don't we just quantify for each $x \in U$ and each $a \in [m]$

$$\Pr_{h \leftarrow \mathcal{H}} [h(x) = a] = c/m$$

Solution: Family of constant functions would satisfy this definition.

- Let $h_{a,b}(x) = ((ax+b) \bmod p) \bmod m$. Then the system $\mathcal{L} = \{h_{a,b} \mid a, b \in [p]\}$ is strongly 4-universal.

Solution: There is a bijection between $(a, b) \in \mathbb{Z}_p^2$ and $(r, s) = (ax \bmod p, bx \bmod p)$.

3.10 Tutorial

1. We have routers (small computers that are sending packets). We want to know what is going on in the network but the routers are not powerful enough to log each packet that goes through them.

- (a) What if each router logs the incoming packets at random?

Solution: If each router logs the packet it sees at random (for each packet toss a coin if it should be logged) then very few packets will be logged along their whole route.

- (b) What kind of family of hash functions do we want to use?

Solution: We wish to use 2-independent (strongly universal) family of hash functions. Otherwise some packets might be logged always (packet zero in our previous problem).

- (c) It is possible that each packet will be either logged on each router it visits or nowhere? At the same time we wish to log just a predefined fraction of packets (with high probability).

Solution: This is easy, all routers will share a random hash function $h: P \rightarrow [m]$ and a packet p will be logged if $h(p) \leq t$ (thus with probability t/m).

2. Let $n, m \in \mathbb{N}$ be constants and let $U = \mathbb{Z}_2^n$. Show that

$$\mathcal{H} = \{h_{A,b} \mid A \in \mathbb{Z}_2^{m \times n}, b \in \mathbb{Z}_2^m\} \quad (\text{where } h_{A,b}(x) = Ax + b)$$

is a 2-universal family of hash-functions.

Solution: A system \mathcal{H} of functions from U to $[m]$ is called *strongly c -universal* (also called *2-independent*) for a constant $c \geq 1$ if for each two different $x \neq y \in U$ and each two slots $a, b \in [m]$ we have

$$\Pr_{h \leftarrow \mathcal{H}} [h(x) = a \wedge h(y) = b] \leq c/m^2$$

So we wish to show that

$$\forall x \neq y \in \mathbb{Z}_2^n, \forall u, v \in \mathbb{Z}_2^m: \Pr_{A \leftarrow \mathbb{Z}_2^{m \times n}, b \leftarrow \mathbb{Z}_2^m} [Ax + b = u \wedge Ay + b = v] \leq 1/2^{2m}$$

- Since $x \neq y$ then at least one of those is nonzero. Without loss of generality let $x \neq \vec{0}$.
- We know that b is a random vector thus $Ay + b$ is also a random vector (Ay is a vector and we add uniformly at random chosen vector to it).
- Since x is not the zero vector thus Ax is a uniformly at random chosen vector which is independent of b .

3. Let us show few useful facts:

(a) Let X, Y be two random variables which are independent. Show that

$$\mathbb{E}[XY] = \mathbb{E}[X]\mathbb{E}[Y]$$

Solution: For the sake of simplicity suppose the variables are discrete. We have $\Pr[X = x \wedge Y = y] = \Pr[X = x] \Pr[Y = y]$ for any $x, y \in \mathbb{R}$, thus

$$\begin{aligned} \mathbb{E}[XY] &= \sum_{x \in \text{Im}(X), y \in \text{Im}(Y)} xy \Pr[X = x \wedge Y = y] \\ &= \sum_{x \in \text{Im}(X), y \in \text{Im}(Y)} xy \Pr[X = x] \Pr[Y = y] \\ &= \left(\sum_{x \in \text{Im}(X)} x \Pr[X = x] \right) \left(\sum_{y \in \text{Im}(Y)} y \Pr[Y = y] \right) \\ &= \mathbb{E}[X]\mathbb{E}[Y] \end{aligned}$$

(b) Let X, Y be two random variables which are independent. Show that

$$\text{var}(X + Y) = \text{var}(X) + \text{var}(Y)$$

Solution:

$$\begin{aligned} \text{var}(X + Y) &= \mathbb{E}[(X + Y)^2] - \mathbb{E}[X + Y]^2 \\ &= \mathbb{E}[X^2 + 2XY + Y^2] - (\mathbb{E}[X] + \mathbb{E}[Y])^2 \\ &= \mathbb{E}[X^2] + 2\mathbb{E}[XY] + \mathbb{E}[Y^2] - \mathbb{E}[X]^2 - 2\mathbb{E}[X]\mathbb{E}[Y] - \mathbb{E}[Y]^2 \\ &= \mathbb{E}[X^2] + \mathbb{E}[Y^2] - \mathbb{E}[X]^2 - \mathbb{E}[Y]^2 \\ &\quad \text{(by independence } \mathbb{E}[XY] = \mathbb{E}[X]\mathbb{E}[Y]) \\ &= \text{var}(X) + \text{var}(Y) \end{aligned}$$

(c) Let X_1, X_2, \dots, X_n be random variables which are pairwise-independent. Show that

$$\text{var} \left(\sum_{j=1}^n X_j \right) = \sum_{j=1}^n \text{var}(X_j)$$

Solution: Similar argument as before, pairwise-independence is enough.

(d) Show that for any two real numbers $a, b \in \mathbb{R}$ we have:

$$\text{var}(aX + b) = a^2 \text{var}(X)$$

Solution: Recall again linearity of expected value: $\mathbb{E}[aX + b] = a\mathbb{E}[X] + b$ for any random variable X and any $a, b \in \mathbb{R}$ and $\mathbb{E}[X + Y] = \mathbb{E}[X] + \mathbb{E}[Y]$ for any two random variables X, Y .

$$\text{var}(aX + b) = \mathbb{E}[(aX + b)^2] - \mathbb{E}[aX + b]^2$$

$$\begin{aligned}
&= \mathbb{E}[a^2X^2 + 2abX + b^2] - (a\mathbb{E}[X] + b)^2 \\
&= a^2\mathbb{E}[X^2] + 2ab\mathbb{E}[X] + b^2 - a^2\mathbb{E}[X]^2 - 2ab\mathbb{E}[X] - b^2 \\
&= a^2\mathbb{E}[X^2] - a^2\mathbb{E}[X]^2 \\
&= a^2\text{var}(X)
\end{aligned}$$

- (e) Show that if $\mu, \sigma \in \mathbb{R}$ and X_1, X_2, \dots, X_n are random variables with $\mathbb{E}[X_j] = \mu$ and $\text{var}(X_j) = \sigma^2$ then

$$\begin{aligned}
\bar{X} &= \frac{1}{n} \sum_{j=1}^n X_j \\
\mathbb{E}[\bar{X}] &= \mu \\
\text{var}[\bar{X}] &= \sigma^2/n
\end{aligned}$$

Solution: Trivial by linearity of expectation and pairwise-independence.

- (f) **Median trick:** let X_1, X_2, \dots, X_n be independent identically distributed such that $\Pr[X_j < c] \leq 1/4$ and $\Pr[X_j > C] \leq 1/4$ (for some constants $c, C \in \mathbb{R}$). Prove that the median M of X_1, X_2, \dots, X_n satisfies

$$\begin{aligned}
\Pr[M < c] &\leq 2e^{-n/8} \\
\Pr[M > C] &\leq 2e^{-n/8}
\end{aligned}$$

Solution: Let G_j be the indicator variable for the event $X_j > C$ and similarly S_j be the indicator for $X_j < c$. If $M > C$ then $\sum_{j=1}^n X_j > n/2$. We know that $\mathbb{E}[\sum_{j=1}^n X_j] \leq n/4$ and we use Chernoff bound. Similarly for the case when $M < c$.

- (g) **Median of means trick:** let X_1, X_2, \dots, X_n are pairwise-independent random variables with variance so high we are unable to use the median trick because we cannot meaningfully bound $\Pr[X_j < c \vee X_j > C]$.

Solution: See <https://www.cs.dartmouth.edu/~ac/Teach/data-streams-lectnotes.pdf> Lemma 4.4.1 for a bit different statement and formal proof.

4. Hash functions have also quite some applications in cryptography. Suppose you have a family of hash functions \mathcal{H} where each function is easy to evaluate, but it is hard to find a preimage (or a collision). We review some applications of this notion.
 - Signing using hashes or checksums using hashes.
 - Blockchain.
 - Merkle tree https://en.wikipedia.org/wiki/Merkle_tree

3.11 Tutorial

1. Analyse the **Count-Min Sketch** (Section 5.4 in <https://www.cs.dartmouth.edu/rac/Teach/data-streams-lectnotes.pdf>)

frequency estimation

init: $Q = 2/\epsilon$

f_a ?
 $t = \lceil \log(1/\delta) \rceil$

$$\epsilon, \delta \quad \Pr[f_a \leq \hat{f}_a \leq f_a + \epsilon \lceil \log(1/\delta) \rceil] \geq 1 - \delta$$

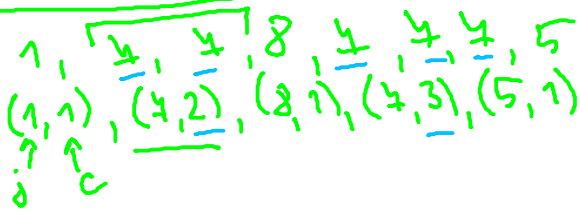
$$C[1..t][1..Q] \leftarrow 0$$

t indep. hash f. $h_1, \dots, h_t: [m] \rightarrow [Q]$ from 2-univ. fam.

process item (j, c) count ≥ 0

for $i \in [t]$:
 $C[i][h_i(j)] = C[i][h_i(j)] + c$

output on query a
report $\hat{f}_a = \min_{1 \leq i \leq t} C[i][h_i(a)]$



vanilla s.m.
cache register s.m.

$f_a = \#$ of times a has appeared

$f_1 = 1$ $f_4 = 5$ $f_2 = 1$ $f_5 = 1$

!!!

we always overcount (maybe by 0)
analyse by how much we overcount

for fixed a
 $X_i = C[i][h_i(a)]$

Y_{ij} for $j \in [m] - \{a\}$
 Y_{ij} ... indicator of $h_i(j) = h_i(a)$

$f_a \geq 0$

$$X_i = \sum_{j \in [m] - \{a\}} f_j Y_{ij}$$

$$\mathbb{E}[X_i] = \sum_{j \neq a} f_j \mathbb{E}[Y_{ij}] = \sum_{j \neq a} \frac{f_j}{2} = \frac{\|f\|_1 - f_a}{2} = \frac{\|f - a\|_1}{2}$$

$X_i \geq 0 \Rightarrow$ Markov ineq.:

$$\Pr[X_i \geq \epsilon \|f - a\|_1] \leq \frac{\|f - a\|_1}{2 \epsilon \|f - a\|_1} = \frac{1}{2 \epsilon} = \frac{1}{2} \quad Q = \frac{2}{\epsilon}$$

$$\Pr[\hat{f}_a - f_a \geq \epsilon \|f - a\|_1] = \Pr[\min_{1 \leq i \leq t} X_i \geq \epsilon \|f - a\|_1] = \Pr[\bigwedge_{1 \leq i \leq t} X_i \geq \epsilon \|f - a\|_1]$$

$$= \prod_{1 \leq i \leq t} \Pr[X_i \geq \epsilon \|f - a\|_1] \leq 2^{-t} = \delta \quad t = \lceil \log(1/\delta) \rceil$$

↑ independence

it uses less space but weaker app
 $t \in \mathbb{R}^m \quad \|x\|_1 \leq \|x\|_2$

2. Let us consider approximation of MAX-SAT:

(a) Define MAX-3SAT and MAX-E3SAT:

SAT given formula $\varphi(x_1, \dots, x_m) = \underbrace{(x_2 \vee x_4 \vee \overline{x_1})}_{\text{clause}} \wedge (\dots) \wedge \dots$
 $\hookrightarrow \exists \vec{x} \in \{\text{true, false}\}^m$ (or finding it)
 $\hookrightarrow \varphi(\vec{x}) = \text{true}$

3SAT ... each clause has ≤ 3 literals (i.e., either variable or its negation)

E3SAT ... $\quad \quad \quad = 3 \text{ lit.} \quad \quad \quad$

MAX-3SAT ... ? find an assignment \vec{x} which satisfies most clauses
 max # of sat. clauses

m clauses in total

(b) Think of the simplest randomized algorithm to solve MAX-E3SAT.

choose $\vec{x} \in \{T, F\}^m$ at random & output

$E[\# \text{ of clauses sat}] = \frac{4}{8} m$

\uparrow linearity of E

$\frac{1}{8}$ chance of fixed clause not sat.

substantial fraction of assign. which sat. $\geq \frac{4}{8} m$ clauses

$E[1, 1, 1, 1, 10^6]$ at most m clauses are satisfied at once

$E[\frac{4}{8}m - \epsilon, \frac{4}{8}m - \epsilon, \frac{4}{8}m - \epsilon, \dots, m] = \frac{4}{8}m$ $\epsilon \geq \frac{1}{8}$

\uparrow # of sat clauses $\quad \quad \quad \uparrow$ # of sat clauses

\hookrightarrow in fact it is not hard to derandomize

(c) What is the least fraction of satisfiable clauses in a E3SAT?

$$\frac{4}{8}$$

(d) What is the least fraction of satisfiable clauses in a 3SAT (not E3SAT)?


$$(x_1) \wedge (\neg x_1) \wedge (x_2) \wedge (\neg x_2) \wedge (x_3) \wedge (\neg x_3) \wedge (x_4) \wedge (\neg x_4) \wedge \dots$$

rand assignment

$$\hookrightarrow \frac{1}{2}$$

(e) If we are promised we are given a formula of 3SAT where either at most half or all of the clauses are satisfiable can you determine which case this is?

say m is even
 $\hookrightarrow \frac{1}{2} m$ is integer
 $\frac{1}{2} \phi$
 at most $\frac{1}{2}$ are satis.



ϕ
 all are satis

α -apx for $\alpha > \frac{1}{2}$
 $\alpha = 0.6$
 if ϕ is all satis
 \hookrightarrow opt gives me at least $0.6 m$ satis. clauses
 $\hookrightarrow \phi \notin \{ \text{at most } \frac{1}{2} \}$

? can there be clauses longer than 1 ? ϕ

E2SAT \mapsto rand. assignment $E[\# \text{ of satisfiable}] = \frac{3}{4} m$

(f) If we are promised we are given a formula of 3SAT where either at most 94% or at least 95% of the clauses are satisfiable can you determine which case this is?

not real gap
 ϕ
 $\frac{94\%}{\phi} \times \frac{95\%}{\phi}$

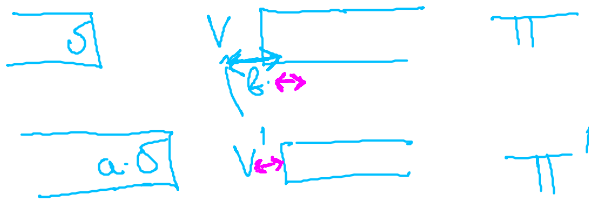
we would need very good apx to tell

by PCP we NP-hardness of gap problems
 some Friday

Definition (Gap-preserving reduction). Let Π, Π' be two optimization problems. Then we say that we have an L-reduction from Π to Π' , if there are two real numbers a, b such that:

- (a) For any instance $I \in \Pi$ we can in polynomial time output an instance $I' \in \Pi'$,
- (b) $OPT(I') \leq aOPT(I)$ and
- (c) if we get a solution S' for I' (of value V') we can in polynomial time output a solution S of the instance I (of value V) such that

$$|OPT(I) - V| \leq b|OPT(I') - V'|.$$



half page in a textbook

\nexists no α -approx for $\alpha > \frac{7}{8}$

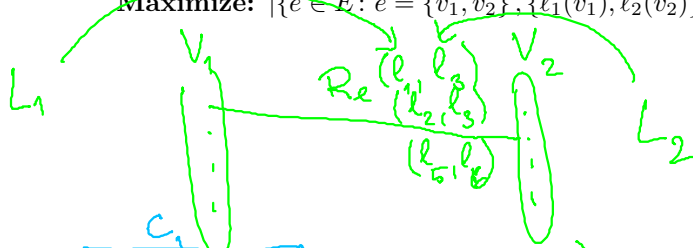
3. Using the theorem that there is no α -approximation of MAX-E3SAT for any $\alpha > 7/8$ unless $P=NP$ prove that there is no β -approximation for any $\beta > 23/24$ for MAX-LABEL-COVER unless $P=NP$.

MAX LABEL COVER

Input: bipartite graph $G = (V_1, V_2, E)$, sets of labels $L_1, L_2 \subseteq \mathbb{N}$ a collection of relations $(R_e)_{e \in E} \subseteq L_1 \times L_2$

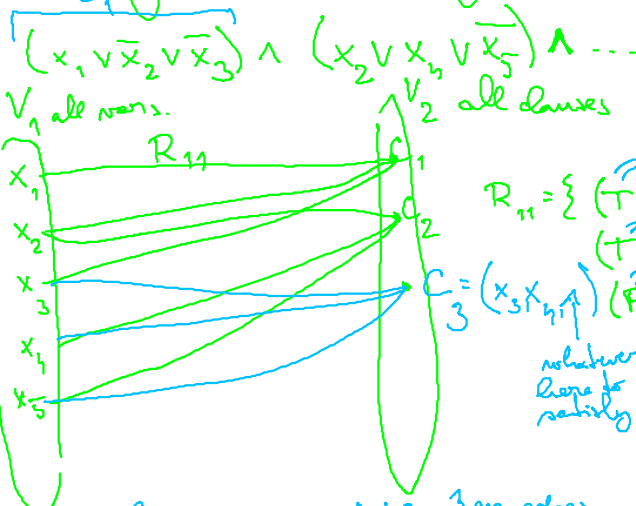
Goal: find labelings $l_i: V_i \rightarrow L_i$.

Maximize: $|\{e \in E: e = \{v_1, v_2\}, \{l_1(v_1), l_2(v_2)\} \in R_e\}|$



we want to assign labels to V_1, V_2 s.t. max # of edges have satisfied relation

E3SAT φ
 $L_1 = \{T, F\}$



$L_2 = L_1 \times L_1 \times L_1$
 $R_{11} = \{ (T(TTT)), (T(TTF)), (T(TFT)), (T(TFF)), (F(FTF)), (F(FFT)), (F(FTF)), (F(FFT)) \}$

whichever satisfies C_1 $\exists x_i$ the first var assign here to satisfy C_3 agrees

φ has m clauses $m \rightarrow$ MLC $3m$ edges
given φ where 2 clauses are not $\rightarrow 3 \cdot 2 + 2(m-2)$ edges in the rel.

$x_1 = T, x_2 = F, \dots$
 $(x_1 \vee \bar{x}_2 \vee \bar{x}_3)$

for any labeling of V_1 \exists a labeling of V_2 where each $r \in V_2$ has either 2 or 3 edges in relation

